

ALTERNATING CURRENT

31.1. IDENTIFY: $i = I \cos \omega t$ and $I_{\text{rms}} = I/\sqrt{2}$.

SET UP: The specified value is the root-mean-square current; $I_{\text{rms}} = 0.34 \text{ A}$.

EXECUTE: (a) $I_{\text{rms}} = 0.34 \text{ A}$

(b) $I = \sqrt{2}I_{\text{rms}} = \sqrt{2}(0.34 \text{ A}) = 0.48 \text{ A}$.

(c) Since the current is positive half of the time and negative half of the time, its average value is zero.

(d) Since I_{rms} is the square root of the average of i^2 , the average square of the current is $I_{\text{rms}}^2 = (0.34 \text{ A})^2 = 0.12 \text{ A}^2$.

EVALUATE: The current amplitude is larger than its rms value.

31.2. IDENTIFY and SET UP: Apply Eqs.(31.3) and (31.4)

EXECUTE: (a) $I = \sqrt{2}I_{\text{rms}} = \sqrt{2}(2.10 \text{ A}) = 2.97 \text{ A}$.

(b) $I_{\text{rav}} = \frac{2}{\pi}I = \frac{2}{\pi}(2.97 \text{ A}) = 1.89 \text{ A}$.

EVALUATE: (c) The root-mean-square voltage is always greater than the rectified average, because squaring the current before averaging, and then taking the square root to get the root-mean-square value will always give a larger value than just averaging.

31.3. IDENTIFY and SET UP: Apply Eq.(31.5).

EXECUTE: (a) $V_{\text{rms}} = \frac{V}{\sqrt{2}} = \frac{45.0 \text{ V}}{\sqrt{2}} = 31.8 \text{ V}$.

(b) Since the voltage is sinusoidal, the average is zero.

EVALUATE: The voltage amplitude is larger than V_{rms} .

31.4. IDENTIFY: $V = IX_C$ with $X_C = \frac{1}{\omega C}$.

SET UP: ω is the angular frequency, in rad/s.

EXECUTE: (a) $V = IX_C = \frac{I}{\omega C}$ so $I = V\omega C = (60.0 \text{ V})(100 \text{ rad/s})(2.20 \times 10^{-6} \text{ F}) = 0.0132 \text{ A}$.

(b) $I = V\omega C = (60.0 \text{ V})(1000 \text{ rad/s})(2.20 \times 10^{-6} \text{ F}) = 0.132 \text{ A}$.

(c) $I = V\omega C = (60.0 \text{ V})(10,000 \text{ rad/s})(2.20 \times 10^{-6} \text{ F}) = 1.32 \text{ A}$.

(d) The plot of $\log I$ versus $\log \omega$ is given in Figure 31.4.

EVALUATE: $I = \omega VC$ so $\log I = \log(VC) + \log \omega$. A graph of $\log I$ versus $\log \omega$ should be a straight line with slope +1, and that is what Figure 31.4 shows.

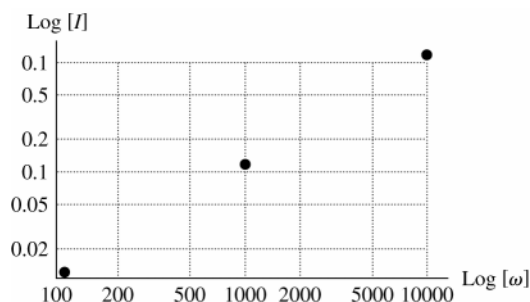


Figure 31.4

31.5. IDENTIFY: $V = IX_L$ with $X_L = \omega L$.

SET UP: ω is the angular frequency, in rad/s.

EXECUTE: (a) $V = IX_L = I\omega L$ and $I = \frac{V}{\omega L} = \frac{60.0 \text{ V}}{(100 \text{ rad/s})(5.00 \text{ H})} = 0.120 \text{ A}$.

(b) $I = \frac{V}{\omega L} = \frac{60.0 \text{ V}}{(1000 \text{ rad/s})(5.00 \text{ H})} = 0.0120 \text{ A}$.

(c) $I = \frac{V}{\omega L} = \frac{60.0 \text{ V}}{(10,000 \text{ rad/s})(5.00 \text{ H})} = 0.00120 \text{ A}$.

(d) The plot of $\log I$ versus $\log \omega$ is given in Figure 31.5.

EVALUATE: $I = \frac{V}{\omega L}$ so $\log I = \log(V/L) - \log \omega$. A graph of $\log I$ versus $\log \omega$ should be a straight line with slope -1 , and that is what Figure 31.5 shows.

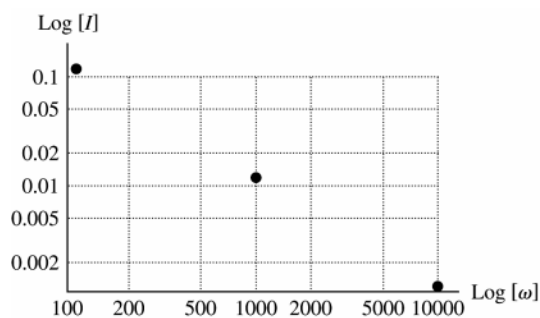


Figure 31.5

31.6. IDENTIFY: The reactance of capacitors and inductors depends on the angular frequency at which they are operated, as well as their capacitance or inductance.

SET UP: The reactances are $X_C = 1/\omega C$ and $X_L = \omega L$.

EXECUTE: (a) Equating the reactances gives $\omega L = \frac{1}{\omega C} \Rightarrow \omega = \frac{1}{\sqrt{LC}}$

(b) Using the numerical values we get $\omega = \frac{1}{\sqrt{LC}} = \frac{1}{\sqrt{(5.00 \text{ mH})(3.50 \mu\text{F})}} = 7560 \text{ rad/s}$

$$X_C = X_L = \omega L = (7560 \text{ rad/s})(5.00 \text{ mH}) = 37.8 \Omega$$

EVALUATE: At other angular frequencies, the two reactances could be very different.

31.7. IDENTIFY and SET UP: For a resistor $v_R = iR$. For an inductor, $v_L = V \cos(\omega t + 90^\circ)$. For a capacitor, $v_C = V \cos(\omega t - 90^\circ)$.

EXECUTE: The graphs are sketched in Figures 31.7a-c. The phasor diagrams are given in Figure 31.7d.

EVALUATE: For a resistor only in the circuit, the current and voltage in phase. For an inductor only, the voltage leads the current by 90° . For a capacitor only, the voltage lags the current by 90° .

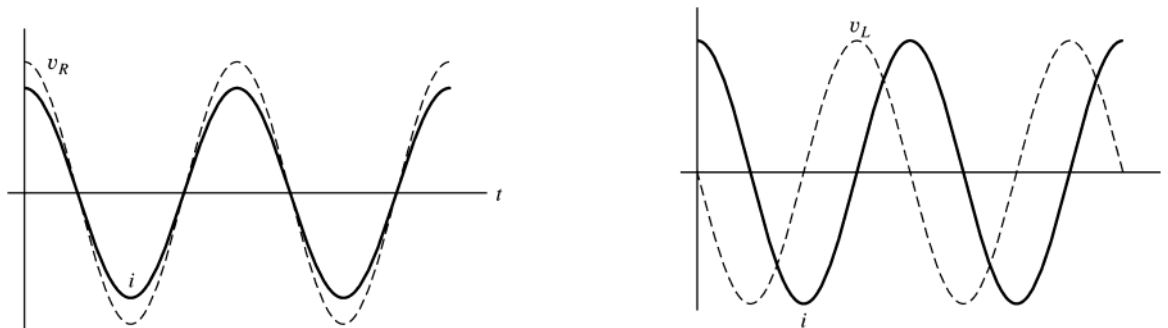


Figure 31.7a and b

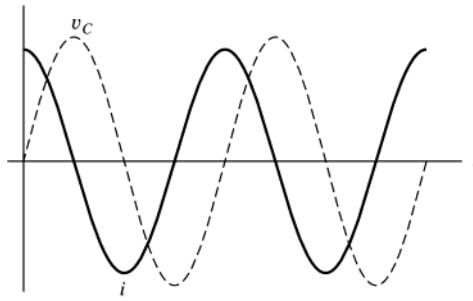


Figure 31.7c

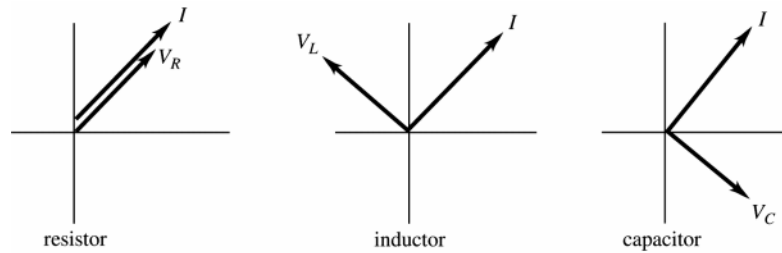


Figure 31.7d

- 31.8. IDENTIFY:** The reactance of an inductor is $X_L = \omega L = 2\pi fL$. The reactance of a capacitor is $X_C = \frac{1}{\omega C} = \frac{1}{2\pi fC}$.

SET UP: The frequency f is in Hz.

EXECUTE: (a) At 60.0 Hz, $X_L = 2\pi(60.0 \text{ Hz})(0.450 \text{ H}) = 170 \Omega$. X_L is proportional to f so at 600 Hz, $X_L = 1700 \Omega$.

(b) At 60.0 Hz, $X_C = \frac{1}{2\pi(60.0 \text{ Hz})(2.50 \times 10^{-6} \text{ F})} = 1.06 \times 10^3 \Omega$. X_C is proportional to $1/f$, so at 600 Hz, $X_C = 106 \Omega$.

(c) $X_L = X_C$ says $2\pi fL = \frac{1}{2\pi fC}$ and $f = \frac{1}{2\pi\sqrt{LC}} = \frac{1}{2\pi\sqrt{(0.450 \text{ H})(2.50 \times 10^{-6} \text{ F})}} = 150 \text{ Hz}$.

EVALUATE: X_L increases when f increases. X_C increases when f decreases.

- 31.9. IDENTIFY and SET UP:** Use Eqs.(31.12) and (31.18).

EXECUTE: (a) $X_L = \omega L = 2\pi fL = 2\pi(80.0 \text{ Hz})(3.00 \text{ H}) = 1510 \Omega$

(b) $X_L = 2\pi fL$ gives $L = \frac{X_L}{2\pi f} = \frac{120 \Omega}{2\pi(80.0 \text{ Hz})} = 0.239 \text{ H}$

(c) $X_C = \frac{1}{\omega C} = \frac{1}{2\pi fC} = \frac{1}{2\pi(80.0 \text{ Hz})(4.00 \times 10^{-6} \text{ F})} = 497 \Omega$

(d) $X_C = \frac{1}{2\pi fC}$ gives $C = \frac{1}{2\pi f X_C} = \frac{1}{2\pi(80.0 \text{ Hz})(120 \Omega)} = 1.66 \times 10^{-5} \text{ F}$

EVALUATE: X_L increases when L increases; X_C decreases when C increases.

- 31.10. IDENTIFY:** $V_L = I\omega L$

SET UP: ω is the angular frequency, in rad/s. $f = \frac{\omega}{2\pi}$ is the frequency in Hz.

EXECUTE: $V_L = I\omega L$ so $f = \frac{V_L}{2\omega IL} = \frac{(12.0 \text{ V})}{2\pi(2.60 \times 10^{-3} \text{ A})(4.50 \times 10^{-4} \text{ H})} = 1.63 \times 10^6 \text{ Hz}$.

EVALUATE: When f is increased, I decreases.

- 31.11. IDENTIFY and SET UP:** Apply Eqs.(31.18) and (31.19).

EXECUTE: $V = IX_C$ so $X_C = \frac{V}{I} = \frac{170 \text{ V}}{0.850 \text{ A}} = 200 \Omega$

$X_C = \frac{1}{\omega C}$ gives $C = \frac{1}{2\pi f X_C} = \frac{1}{2\pi(60.0 \text{ Hz})(200 \Omega)} = 1.33 \times 10^{-5} \text{ F} = 13.3 \mu\text{F}$

EVALUATE: The reactance relates the voltage amplitude to the current amplitude and is similar to Ohm's law.

31.12. IDENTIFY: Compare v_C that is given in the problem to the general form $v_C = \frac{I}{\omega C} \sin \omega t$ and determine ω .

SET UP: $X_C = \frac{1}{\omega C}$, $v_R = iR$ and $i = I \cos \omega t$.

EXECUTE: (a) $X_C = \frac{1}{\omega C} = \frac{1}{(120 \text{ rad/s})(4.80 \times 10^{-6} \text{ F})} = 1736 \Omega$

(b) $I = \frac{V_C}{X_C} = \frac{7.60 \text{ V}}{1736 \Omega} = 4.378 \times 10^{-3} \text{ A}$ and $i = I \cos \omega t = (4.378 \times 10^{-3} \text{ A}) \cos[(120 \text{ rad/s})t]$. Then

$$v_R = iR = (4.38 \times 10^{-3} \text{ A})(250 \Omega) \cos((120 \text{ rad/s})t) = (1.10 \text{ V}) \cos((120 \text{ rad/s})t).$$

EVALUATE: The voltage across the resistor has a different phase than the voltage across the capacitor.

31.13. IDENTIFY and SET UP: The voltage and current for a resistor are related by $v_R = iR$. Deduce the frequency of the voltage and use this in Eq.(31.12) to calculate the inductive reactance. Eq.(31.10) gives the voltage across the inductor.

EXECUTE: (a) $v_R = (3.80 \text{ V}) \cos[(720 \text{ rad/s})t]$

$$v_R = iR, \text{ so } i = \frac{v_R}{R} = \left(\frac{3.80 \text{ V}}{150 \Omega} \right) \cos[(720 \text{ rad/s})t] = (0.0253 \text{ A}) \cos[(720 \text{ rad/s})t]$$

(b) $X_L = \omega L$

$$\omega = 720 \text{ rad/s}, L = 0.250 \text{ H}, \text{ so } X_L = \omega L = (720 \text{ rad/s})(0.250 \text{ H}) = 180 \Omega$$

(c) If $i = I \cos \omega t$ then $v_L = V_L \cos(\omega t + 90^\circ)$ (from Eq.31.10). $V_L = I\omega L = IX_L = (0.02533 \text{ A})(180 \Omega) = 4.56 \text{ V}$
 $v_L = (4.56 \text{ V}) \cos[(720 \text{ rad/s})t + 90^\circ]$

But $\cos(a + 90^\circ) = -\sin a$ (Appendix B), so $v_L = -(4.56 \text{ V}) \sin[(720 \text{ rad/s})t]$.

EVALUATE: The current is the same in the resistor and inductor and the voltages are 90° out of phase, with the voltage across the inductor leading.

31.14. IDENTIFY: Calculate the reactance of the inductor and of the capacitor. Calculate the impedance and use that result to calculate the current amplitude.

SET UP: With no capacitor, $Z = \sqrt{R^2 + X_L^2}$ and $\tan \phi = \frac{X_L}{R}$. $X_L = \omega L$. $I = \frac{V}{Z}$. $V_L = IX_L$ and $V_R = IR$. For an inductor, the voltage leads the current.

EXECUTE: (a) $X_L = \omega L = (250 \text{ rad/s})(0.400 \text{ H}) = 100 \Omega$. $Z = \sqrt{(200 \Omega)^2 + (100 \Omega)^2} = 224 \Omega$.

(b) $I = \frac{V}{Z} = \frac{30.0 \text{ V}}{224 \Omega} = 0.134 \text{ A}$

(c) $V_R = IR = (0.134 \text{ A})(200 \Omega) = 26.8 \text{ V}$. $V_L = IX_L = (0.134 \text{ A})(100 \Omega) = 13.4 \text{ V}$.

(d) $\tan \phi = \frac{X_L}{R} = \frac{100 \Omega}{200 \Omega}$ and $\phi = +26.6^\circ$. Since ϕ is positive, the source voltage leads the current.

(e) The phasor diagram is sketched in Figure 31.14.

EVALUATE: Note that $V_R + V_L$ is greater than V . The loop rule is satisfied at each instance of time but the voltages across R and L reach their maxima at different times.

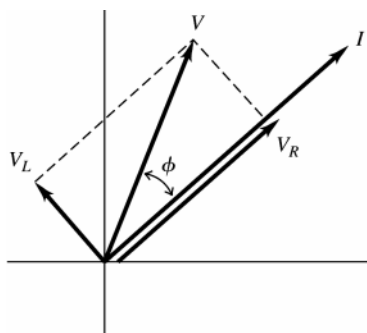


Figure 31.14

31.15. IDENTIFY: $v_R(t)$ is given by Eq.(31.8). $v_L(t)$ is given by Eq.(31.10).

SET UP: From Exercise 31.14, $V = 30.0 \text{ V}$, $V_R = 26.8 \text{ V}$, $V_L = 13.4 \text{ V}$ and $\phi = 26.6^\circ$.

EXECUTE: (a) The graph is given in Figure 31.15.

(b) The different voltages are $v = (30.0 \text{ V}) \cos(250t + 26.6^\circ)$, $v_R = (26.8 \text{ V}) \cos(250t)$,

$v_L = (13.4 \text{ V}) \cos(250t + 90^\circ)$. At $t = 20 \text{ ms}$: $v = 20.5 \text{ V}$, $v_R = 7.60 \text{ V}$, $v_L = 12.85 \text{ V}$. Note that $v_R + v_L = v$.

(c) At $t = 40$ ms: $v = -15.2$ V, $v_R = -22.49$ V, $v_L = 7.29$ V. Note that $v_R + v_L = v$.

EVALUATE: It is important to be careful with radians versus degrees in above expressions!

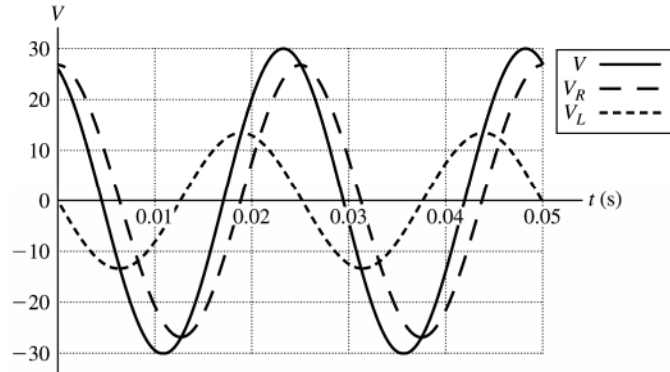


Figure 31.15

31.16. IDENTIFY: Calculate the reactance of the inductor and of the capacitor. Calculate the impedance and use that result to calculate the current amplitude.

SET UP: With no resistor, $Z = \sqrt{(X_L - X_C)^2} = |X_L - X_C|$. $\tan \phi = \frac{X_L - X_C}{\text{zero}}$. $X_C = \frac{1}{\omega C}$. $X_L = \omega L$. For an inductor, the voltage leads the current. For a capacitor, the voltage lags the current.

EXECUTE: (a) $X_L = \omega L = (250 \text{ rad/s})(0.400 \text{ H}) = 100 \Omega$. $X_C = \frac{1}{\omega C} = \frac{1}{(250 \text{ rad/s})(6.00 \times 10^{-6} \text{ F})} = 667 \Omega$.

$$Z = |X_L - X_C| = |100 \Omega - 667 \Omega| = 567 \Omega.$$

$$(b) I = \frac{V}{Z} = \frac{30.0 \text{ V}}{567 \Omega} = 0.0529 \text{ A}$$

$$(c) V_C = IX_C = (0.0529 \text{ A})(667 \Omega) = 35.3 \text{ V}. V_L = IX_L = (0.0529 \text{ A})(100 \Omega) = 5.29 \text{ V}.$$

(d) $\tan \phi = \frac{X_L - X_C}{\text{zero}} = \frac{100 \Omega - 667 \Omega}{\text{zero}} = -\infty$ and $\phi = -90^\circ$. The phase angle is negative and the source voltage lags the current.

(e) The phasor diagram is sketched in Figure 31.16.

EVALUATE: When $X_C > X_L$ the phase angle is negative and the source voltage lags the current.

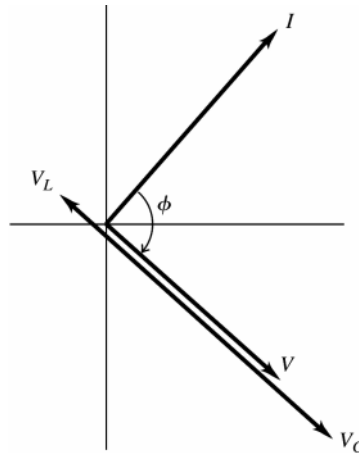


Figure 31.16

31.17. IDENTIFY and SET UP: Calculate the impedance of the circuit and use Eq.(31.22) to find the current amplitude. The voltage amplitudes across each circuit element are given by Eqs.(31.7), (31.13), and (31.19). The phase angle is calculated using Eq.(31.24). The circuit is shown in Figure 31.17a.

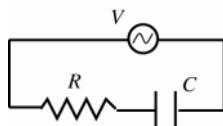


Figure 31.17a

No inductor means $X_L = 0$

$$R = 200 \Omega, C = 6.00 \times 10^{-6} \text{ F},$$

$$V = 30.0 \text{ V}, \omega = 250 \text{ rad/s}$$

EXECUTE: (a) $X_C = \frac{1}{\omega C} = \frac{1}{(250 \text{ rad/s})(6.00 \times 10^{-6} \text{ F})} = 666.7 \Omega$

$$Z = \sqrt{R^2 + (X_L - X_C)^2} = \sqrt{(200 \Omega)^2 + (666.7 \Omega)^2} = 696 \Omega$$

(b) $I = \frac{V}{Z} = \frac{30.0 \text{ V}}{696 \Omega} = 0.0431 \text{ A} = 43.1 \text{ mA}$

(c) Voltage amplitude across the resistor: $V_R = IR = (0.0431 \text{ A})(200 \Omega) = 8.62 \text{ V}$

Voltage amplitude across the capacitor: $V_C = IX_C = (0.0431 \text{ A})(666.7 \Omega) = 28.7 \text{ V}$

(d) $\tan \phi = \frac{X_L - X_C}{R} = \frac{0 - 666.7 \Omega}{200 \Omega} = -3.333$ so $\phi = -73.3^\circ$

The phase angle is negative, so the source voltage lags behind the current.

(e) The phasor diagram is sketched qualitatively in Figure 31.17b.

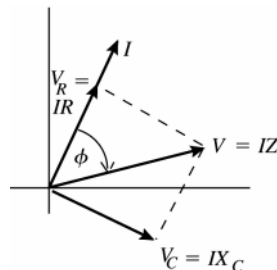


Figure 31.17b

EVALUATE: The voltage across the resistor is in phase with the current and the capacitor voltage lags the current by 90° . The presence of the capacitor causes the source voltage to lag behind the current. Note that $V_R + V_C > V$.

The instantaneous voltages in the circuit obey the loop rule at all times but because of the phase differences the voltage amplitudes do not.

31.18. IDENTIFY: $v_R(t)$ is given by Eq.(31.8). $v_C(t)$ is given by Eq.(31.16).

SET UP: From Exercise 31.17, $V = 30.0 \text{ V}$, $V_R = 8.62 \text{ V}$, $V_C = 28.7 \text{ V}$ and $\phi = -73.3^\circ$.

EXECUTE: (a) The graph is given in Figure 31.18.

(b) The different voltage are:

$$v = (30.0 \text{ V}) \cos(250t - 73.3^\circ), \quad v_R = (8.62 \text{ V}) \cos(250t), \quad v_C = (28.7 \text{ V}) \cos(250t - 90^\circ).$$

At $t = 20 \text{ ms}$: $v = -25.1 \text{ V}$, $v_R = 2.45 \text{ V}$, $v_C = -27.5 \text{ V}$. Note that $v_R + v_C = v$.

(c) At $t = 40 \text{ ms}$: $v = -22.9 \text{ V}$, $v_R = -7.23 \text{ V}$, $v_C = -15.6 \text{ V}$. Note that $v_R + v_C = v$.

EVALUATE: It is important to be careful with radians vs. degrees!

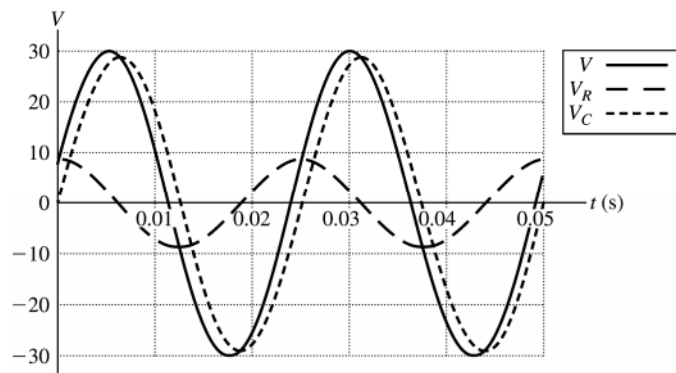


Figure 31.18

31.19. IDENTIFY: Apply the equations in Section 31.3.

SET UP: $\omega = 250 \text{ rad/s}$, $R = 200 \Omega$, $L = 0.400 \text{ H}$, $C = 6.00 \mu\text{F}$ and $V = 30.0 \text{ V}$.

EXECUTE: (a) $Z = \sqrt{R^2 + (\omega L - 1/\omega C)^2}$.

$$Z = \sqrt{(200 \Omega)^2 + ((250 \text{ rad/s})(0.400 \text{ H}) - 1/((250 \text{ rad/s})(6.00 \times 10^{-6} \text{ F})))^2} = 601 \Omega$$

(b) $I = \frac{V}{Z} = \frac{30 \text{ V}}{601 \Omega} = 0.0499 \text{ A}$.

(c) $\phi = \arctan\left(\frac{\omega L - 1/\omega C}{R}\right) = \arctan\left(\frac{100 \Omega - 667 \Omega}{200 \Omega}\right) = -70.6^\circ$, and the voltage lags the current.

(d) $V_R = IR = (0.0499 \text{ A})(200 \Omega) = 9.98 \text{ V}$;

$$V_L = I\omega L = (0.0499 \text{ A})(250 \text{ rad/s})(0.400 \text{ H}) = 4.99 \text{ V}; \quad V_C = \frac{I}{\omega C} = \frac{(0.0499 \text{ A})}{(250 \text{ rad/s})(6.00 \times 10^{-6} \text{ F})} = 33.3 \text{ V}.$$

EVALUATE: (e) At any instant, $v = v_R + v_C + v_L$. But v_C and v_L are 180° out of phase, so v_C can be larger than v at a value of t , if $v_L + v_R$ is negative at that t .

31.20. IDENTIFY: $v_R(t)$ is given by Eq.(31.8). $v_C(t)$ is given by Eq.(31.16). $v_L(t)$ is given by Eq.(31.10).

SET UP: From Exercise 31.19, $V = 30.0 \text{ V}$, $V_L = 4.99 \text{ V}$, $V_R = 9.98 \text{ V}$, $V_C = 33.3 \text{ V}$ and $\phi = -70.6^\circ$.

EXECUTE: (a) The graph is sketched in Figure 31.20. The different voltages plotted in the graph are: $v = (30 \text{ V})\cos(250t - 70.6^\circ)$, $v_R = (9.98 \text{ V})\cos(250t)$, $v_L = (4.99 \text{ V})\cos(250t + 90^\circ)$ and $v_C = (33.3 \text{ V})\cos(250t - 90^\circ)$.

(b) At $t = 20 \text{ ms}$: $v = -24.3 \text{ V}$, $v_R = 2.83 \text{ V}$, $v_L = 4.79 \text{ V}$, $v_C = -31.9 \text{ V}$.

(c) At $t = 40 \text{ ms}$: $v = -23.8 \text{ V}$, $v_R = -8.37 \text{ V}$, $v_L = 2.71 \text{ V}$, $v_C = -18.1 \text{ V}$.

EVALUATE: In both parts (b) and (c), note that the source voltage equals the sum of the other voltages at the given instant. Be careful with degrees versus radians!

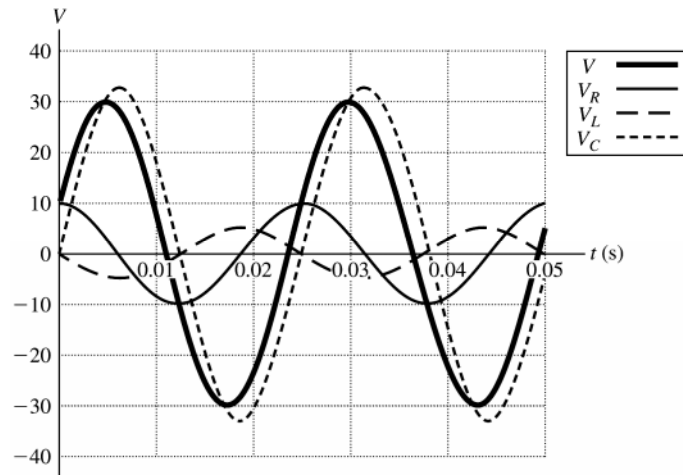


Figure 31.20

31.21. IDENTIFY and SET UP: The current is largest at the resonance frequency. At resonance, $X_L = X_C$ and $Z = R$. For part (b), calculate Z and use $I = V/Z$.

EXECUTE: (a) $f_0 = \frac{1}{2\pi\sqrt{LC}} = 113 \text{ Hz}$. $I = V/R = 15.0 \text{ mA}$.

(b) $X_C = 1/\omega C = 500 \Omega$. $X_L = \omega L = 160 \Omega$. $Z = \sqrt{R^2 + (X_L - X_C)^2} = \sqrt{(200 \Omega)^2 + (160 \Omega - 500 \Omega)^2} = 394.5 \Omega$.
 $I = V/Z = 7.61 \text{ mA}$. $X_C > X_L$ so the source voltage lags the current.

EVALUATE: $\omega_0 = 2\pi f_0 = 710 \text{ rad/s}$. $\omega = 400 \text{ rad/s}$ and is less than ω_0 . When $\omega < \omega_0$, $X_C > X_L$. Note that I in part (b) is less than I in part (a).

31.22. IDENTIFY: The impedance and individual reactances depend on the angular frequency at which the circuit is driven.

SET UP: The impedance is $Z = \sqrt{R^2 + \left(\omega L - \frac{1}{\omega C}\right)^2}$, the current amplitude is $I = V/Z$, and the instantaneous values of the potential and current are $v = V \cos(\omega t + \phi)$, where $\tan \phi = (X_L - X_C)/R$, and $i = I \cos \omega t$.

EXECUTE: (a) Z is a minimum when $\omega L = \frac{1}{\omega C}$, which gives $\omega = \frac{1}{\sqrt{LC}} = \frac{1}{\sqrt{(8.00 \text{ mH})(12.5 \mu\text{F})}} = 3162 \text{ rad/s} =$

3160 rad/s and $Z = R = 175 \Omega$.

(b) $I = V/Z = (25.0 \text{ V})/(175 \Omega) = 0.143 \text{ A}$

(c) $i = I \cos \omega t = I/2$, so $\cos \omega t = \frac{1}{2}$, which gives $\omega t = 60^\circ = \pi/3 \text{ rad}$. $v = V \cos(\omega t + \phi)$, where $\tan \phi = (X_L - X_C)/R = 0/R = 0$. So, $v = (25.0 \text{ V}) \cos \omega t = (25.0 \text{ V})(1/2) = 12.5 \text{ V}$.

$v_R = Ri = (175 \Omega)(1/2)(0.143 \text{ A}) = 12.5 \text{ V}$.

$v_C = V_C \cos(\omega t - 90^\circ) = IX_C \cos(\omega t - 90^\circ) = \frac{0.143 \text{ A}}{(3162 \text{ rad/s})(12.5 \mu\text{F})} \cos(60^\circ - 90^\circ) = +3.13 \text{ V}$.

$$v_L = V_L \cos(\omega t + 90^\circ) = IX_L \cos(\omega t + 90^\circ) = (0.143 \text{ A})(3162 \text{ rad/s})(8.00 \text{ mH}) \cos(60^\circ + 90^\circ).$$

$$v_L = -3.13 \text{ V}.$$

$$(d) v_R + v_L + v_C = 12.5 \text{ V} + (-3.13 \text{ V}) + 3.13 \text{ V} = 12.5 \text{ V} = v_{\text{source}}$$

EVALUATE: The instantaneous potential differences across all the circuit elements always add up to the value of the source voltage at that instant. In this case (resonance), the potentials across the inductor and capacitor have the same magnitude but are 180° out of phase, so they add to zero, leaving all the potential difference across the resistor.

31.23. IDENTIFY and SET UP: Use the equation that precedes Eq.(31.20): $V^2 = V_R^2 + (V_L - V_C)^2$

$$\text{EXECUTE: } V = \sqrt{(30.0 \text{ V})^2 + (50.0 \text{ V} - 90.0 \text{ V})^2} = 50.0 \text{ V}$$

EVALUATE: The equation follows directly from the phasor diagrams of Fig.31.13 (b or c). Note that the voltage amplitudes do not simply add to give 170.0 V for the source voltage.

31.24. IDENTIFY and SET UP: $X_L = \omega L$ and $X_C = \frac{1}{\omega C}$.

$$\text{EXECUTE: (a) If } \omega = \omega_0 = \frac{1}{\sqrt{LC}}, \text{ then } X = \omega L - \frac{1}{\omega C} \text{ and } X = \frac{L}{\sqrt{LC}} - \frac{1}{C/\sqrt{LC}} = 0.$$

(b) When $\omega > \omega_0$, $X > 0$

(c) When $\omega < \omega_0$, $X < 0$

(d) The graph of X versus ω is given in Figure 31.24.

$$\text{EVALUATE: } Z = \sqrt{R^2 + X^2} \text{ and } \tan \phi = X/R.$$

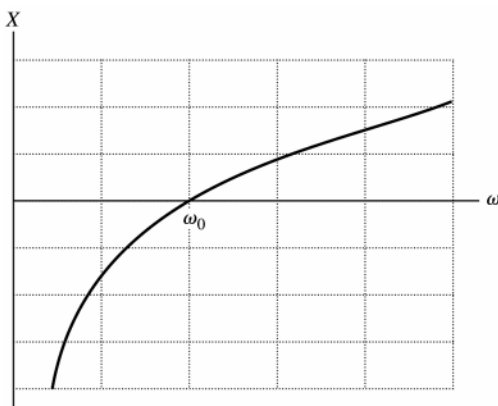


Figure 31.24

31.25. IDENTIFY: For a pure resistance, $P_{\text{av}} = V_{\text{rms}} I_{\text{rms}} = I_{\text{rms}}^2 R$.

SET UP: 20.0 W is the average power P_{av} .

EXECUTE: (a) The average power is one-half the maximum power, so the maximum instantaneous power is 40.0 W.

$$(b) I_{\text{rms}} = \frac{P_{\text{av}}}{V_{\text{rms}}} = \frac{20.0 \text{ W}}{120 \text{ V}} = 0.167 \text{ A}$$

$$(c) R = \frac{P_{\text{av}}}{I_{\text{rms}}^2} = \frac{20.0 \text{ W}}{(0.167 \text{ A})^2} = 720 \Omega$$

$$\text{EVALUATE: We can also calculate the average power as } P_{\text{av}} = \frac{V_{R,\text{rms}}^2}{R} = \frac{V_{\text{rms}}^2}{R} = \frac{(120 \text{ V})^2}{720 \Omega} = 20.0 \text{ W}.$$

31.26. IDENTIFY: The average power supplied by the source is $P = V_{\text{rms}} I_{\text{rms}} \cos \phi$. The power consumed in the resistance is $P = I_{\text{rms}}^2 R$.

$$\text{SET UP: } \omega = 2\pi f = 2\pi(1.25 \times 10^3 \text{ Hz}) = 7.854 \times 10^3 \text{ rad/s. } X_L = \omega L = 157 \Omega. X_C = \frac{1}{\omega C} = 909 \Omega.$$

EXECUTE: (a) First, let us find the phase angle between the voltage and the current:

$$\tan \phi = \frac{X_L - X_C}{R} = \frac{157 \Omega - 909 \Omega}{350 \Omega} \text{ and } \phi = -65.04^\circ. \text{ The impedance of the circuit is}$$

$$Z = \sqrt{R^2 + (X_L - X_C)^2} = \sqrt{(350 \Omega)^2 + (-752 \Omega)^2} = 830 \Omega. \text{ The average power provided by the generator is then}$$

$$P = V_{\text{rms}} I_{\text{rms}} \cos(\phi) = \frac{V_{\text{rms}}^2}{Z} \cos(\phi) = \frac{(120 \text{ V})^2}{830 \Omega} \cos(-65.04^\circ) = 7.32 \text{ W}$$

(b) The average power dissipated by the resistor is $P_R = I_{\text{rms}}^2 R = \left(\frac{120 \text{ V}}{830 \Omega}\right)^2 (350 \Omega) = 7.32 \text{ W}$.

EVALUATE: Conservation of energy requires that the answers to parts (a) and (b) are equal.

31.27. IDENTIFY: The power factor is $\cos \phi$, where ϕ is the phase angle in Fig. 31.13. The average power is given by Eq. (31.31). Use the result of part (a) to rewrite this expression.

(a) **SET UP:** The phasor diagram is sketched in Figure 31.27.

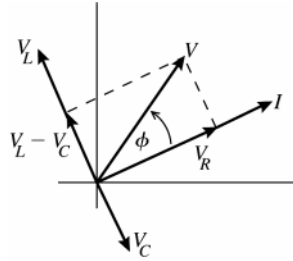


Figure 31.27

EXECUTE:

From the diagram

$$\cos \phi = \frac{V_R}{V} = \frac{IR}{IZ} = \frac{R}{Z},$$

as was to be shown.

(b) $P_{\text{av}} = V_{\text{rms}} I_{\text{rms}} \cos \phi = V_{\text{rms}} I_{\text{rms}} \left(\frac{R}{Z}\right) = \left(\frac{V_{\text{rms}}}{Z}\right) I_{\text{rms}} R$. But $\frac{V_{\text{rms}}}{Z} = I_{\text{rms}}$, so $P_{\text{av}} = I_{\text{rms}}^2 R$.

EVALUATE: In an L - R - C circuit, electrical energy is stored and released in the inductor and capacitor but none is dissipated in either of these circuit elements. The power delivered by the source equals the power dissipated in the resistor.

31.28. IDENTIFY and SET UP: $P_{\text{av}} = V_{\text{rms}} I_{\text{rms}} \cos \phi$. $I_{\text{rms}} = \frac{V_{\text{rms}}}{Z}$. $\cos \phi = \frac{R}{Z}$.

EXECUTE: $I_{\text{rms}} = \frac{80.0 \text{ V}}{105 \Omega} = 0.762 \text{ A}$. $\cos \phi = \frac{75.0 \Omega}{105 \Omega} = 0.714$. $P_{\text{av}} = (80.0 \text{ V})(0.762 \text{ A})(0.714) = 43.5 \text{ W}$.

EVALUATE: Since the average power consumed by the inductor and by the capacitor is zero, we can also calculate the average power as $P_{\text{av}} = I_{\text{rms}}^2 R = (0.762 \text{ A})^2 (75.0 \Omega) = 43.5 \text{ W}$.

31.29. IDENTIFY and SET UP: Use the equations of Section 31.3 to calculate ϕ , Z and V_{rms} . The average power delivered by the source is given by Eq. (31.31) and the average power dissipated in the resistor is $I_{\text{rms}}^2 R$.

EXECUTE: (a) $X_L = \omega L = 2\pi f L = 2\pi(400 \text{ Hz})(0.120 \text{ H}) = 301.6 \Omega$

$$X_C = \frac{1}{\omega C} = \frac{1}{2\pi f C} = \frac{1}{2\pi(400 \text{ Hz})(7.3 \times 10^{-6} \text{ Hz})} = 54.51 \Omega$$

$\tan \phi = \frac{X_L - X_C}{R} = \frac{301.6 \Omega - 54.41 \Omega}{240 \Omega}$, so $\phi = +45.8^\circ$. The power factor is $\cos \phi = +0.697$.

(b) $Z = \sqrt{R^2 + (X_L - X_C)^2} = \sqrt{(240 \Omega)^2 + (301.6 \Omega - 54.51 \Omega)^2} = 344 \Omega$

(c) $V_{\text{rms}} = I_{\text{rms}} Z = (0.450 \text{ A})(344 \Omega) = 155 \text{ V}$

(d) $P_{\text{av}} = I_{\text{rms}} V_{\text{rms}} \cos \phi = (0.450 \text{ A})(155 \text{ V})(0.697) = 48.6 \text{ W}$

(e) $P_{\text{av}} = I_{\text{rms}}^2 R = (0.450 \text{ A})^2 (240 \Omega) = 48.6 \text{ W}$

EVALUATE: The average electrical power delivered by the source equals the average electrical power consumed in the resistor.

(f) All the energy stored in the capacitor during one cycle of the current is released back to the circuit in another part of the cycle. There is no net dissipation of energy in the capacitor.

(g) The answer is the same as for the capacitor. Energy is repeatedly being stored and released in the inductor, but no net energy is dissipated there.

31.30. IDENTIFY: The angular frequency and the capacitance can be used to calculate the reactance X_C of the capacitor. The angular frequency and the inductance can be used to calculate the reactance X_L of the inductor. Calculate the phase angle ϕ and then the power factor is $\cos \phi$. Calculate the impedance of the circuit and then the rms current in the circuit. The average power is $P_{\text{av}} = V_{\text{rms}} I_{\text{rms}} \cos \phi$. On the average no power is consumed in the capacitor or the inductor, it is all consumed in the resistor.

SET UP: The source has rms voltage $V_{\text{rms}} = \frac{V}{\sqrt{2}} = \frac{45 \text{ V}}{\sqrt{2}} = 31.8 \text{ V}$.

EXECUTE: $X_L = \omega L = (360 \text{ rad/s})(15 \times 10^{-3} \text{ H}) = 5.4 \Omega$. $X_C = \frac{1}{\omega C} = \frac{1}{(360 \text{ rad/s})(3.5 \times 10^{-6} \text{ F})} = 794 \Omega$.

$\tan \phi = \frac{X_L - X_C}{R} = \frac{5.4 \Omega - 794 \Omega}{250 \Omega}$ and $\phi = -72.4^\circ$. The power factor is $\cos \phi = 0.302$.

(b) $Z = \sqrt{R^2 + (X_L - X_C)^2} = \sqrt{(250 \Omega)^2 + (5.4 \Omega - 794 \Omega)^2} = 827 \Omega$. $I_{\text{rms}} = \frac{V_{\text{rms}}}{Z} = \frac{31.8 \text{ V}}{827 \Omega} = 0.0385 \text{ A}$.

$P_{\text{av}} = V_{\text{rms}} I_{\text{rms}} \cos \phi = (31.8 \text{ V})(0.0385 \text{ A})(0.302) = 0.370 \text{ W}$.

(c) The average power delivered to the resistor is $P_{\text{av}} = I_{\text{rms}}^2 R = (0.0385 \text{ A})^2 (250 \Omega) = 0.370 \text{ W}$. The average power delivered to the capacitor and to the inductor is zero.

EVALUATE: On average the power delivered to the circuit equals the power consumed in the resistor. The capacitor and inductor store electrical energy during part of the current oscillation but each return the energy to the circuit during another part of the current cycle.

31.31. IDENTIFY and SET UP: At the resonance frequency, $Z = R$. Use that $V = IZ$, $V_R = IR$, $V_L = IX_L$ and $V_C = IX_C$. P_{av} is given by Eq.(31.31).

(a) **EXECUTE:** $V = IZ = IR = (0.500 \text{ A})(300 \Omega) = 150 \text{ V}$

(b) $V_R = IR = 150 \text{ V}$

$X_L = \omega L = L(1/\sqrt{LC}) = \sqrt{L/C} = 2582 \Omega$; $V_L = IX_L = 1290 \text{ V}$

$X_C = 1/(\omega C) = \sqrt{L/C} = 2582 \Omega$; $V_C = IX_C = 1290 \text{ V}$

(c) $P_{\text{av}} = \frac{1}{2} VI \cos \phi = \frac{1}{2} I^2 R$, since $V = IR$ and $\cos \phi = 1$ at resonance.

$P_{\text{av}} = \frac{1}{2} (0.500 \text{ A})^2 (300 \Omega) = 37.5 \text{ W}$

EVALUATE: At resonance $V_L = V_C$. Note that $V_L + V_C > V$. However, at any instant $v_L + v_C = 0$.

31.32. IDENTIFY: The current is maximum at the resonance frequency, so choose C such that $\omega = 50.0 \text{ rad/s}$ is the resonance frequency. At the resonance frequency $Z = R$.

SET UP: $V_L = I\omega L$

EXECUTE: (a) The amplitude of the current is given by $I = \frac{V}{\sqrt{R^2 + (\omega L - \frac{1}{\omega C})^2}}$. Thus, the current will have a

maximum amplitude when $\omega L = \frac{1}{\omega C}$. Therefore, $C = \frac{1}{\omega^2 L} = \frac{1}{(50.0 \text{ rad/s})^2 (9.00 \text{ H})} = 44.4 \mu\text{F}$.

(b) With the capacitance calculated above we find that $Z = R$, and the amplitude of the current is

$I = \frac{V}{R} = \frac{120 \text{ V}}{400 \Omega} = 0.300 \text{ A}$. Thus, the amplitude of the voltage across the inductor is

$V_L = I(\omega L) = (0.300 \text{ A})(50.0 \text{ rad/s})(9.00 \text{ H}) = 135 \text{ V}$.

EVALUATE: Note that V_L is greater than the source voltage amplitude.

31.33. IDENTIFY and SET UP: At resonance $X_L = X_C$, $\phi = 0$ and $Z = R$. $R = 150 \Omega$, $L = 0.750 \text{ H}$, $C = 0.0180 \mu\text{F}$, $V = 150 \text{ V}$

EXECUTE: (a) At the resonance frequency $X_L = X_C$ and from $\tan \phi = \frac{X_L - X_C}{R}$ we have that $\phi = 0^\circ$ and the power factor is $\cos \phi = 1.00$.

(b) $P_{\text{av}} = \frac{1}{2} VI \cos \phi$ (Eq.31.31)

At the resonance frequency $Z = R$, so $I = \frac{V}{Z} = \frac{V}{R}$

$P_{\text{av}} = \frac{1}{2} V \left(\frac{V}{R} \right) \cos \phi = \frac{1}{2} \frac{V^2}{R} = \frac{1}{2} \frac{(150 \text{ V})^2}{150 \Omega} = 75.0 \text{ W}$

(c) **EVALUATE:** When C and f are changed but the circuit is kept on resonance, nothing changes in $P_{\text{av}} = V^2/(2R)$, so the average power is unchanged: $P_{\text{av}} = 75.0 \text{ W}$. The resonance frequency changes but since $Z = R$ at resonance the current doesn't change.

31.34. IDENTIFY: $\omega_0 = \frac{1}{\sqrt{LC}}$. $V_C = IX_C$. $V = IZ$.

SET UP: At resonance, $Z = R$.

EXECUTE: (a) $\omega_0 = \frac{1}{\sqrt{LC}} = \frac{1}{\sqrt{(0.350 \text{ H})(0.0120 \times 10^{-6} \text{ F})}} = 1.54 \times 10^4 \text{ rad/s}$

(b) $V = IZ = \left(\frac{V_C}{X_C}\right)Z = \left(\frac{V_C}{X_C}\right)R$. $X_C = \frac{1}{\omega C} = \frac{1}{(1.54 \times 10^4 \text{ rad/s})(0.0120 \times 10^{-6} \text{ F})} = 5.41 \times 10^3 \Omega$.

$V = \left(\frac{550 \text{ V}}{5.41 \times 10^3 \Omega}\right)(400 \Omega) = 40.7 \text{ V}$.

EVALUATE: The voltage amplitude for the capacitor is more than a factor of 10 times greater than the voltage amplitude of the source.

31.35. IDENTIFY and SET UP: The resonance angular frequency is $\omega_0 = \frac{1}{\sqrt{LC}}$. $X_L = \omega L$. $X_C = \frac{1}{\omega C}$ and

$Z = \sqrt{R^2 + (X_L - X_C)^2}$. At the resonance frequency $X_L = X_C$ and $Z = R$.

EXECUTE: (a) $Z = R = 115 \Omega$

(b) $\omega_0 = \frac{1}{\sqrt{(4.50 \times 10^{-3} \text{ H})(1.26 \times 10^{-6} \text{ F})}} = 1.33 \times 10^4 \text{ rad/s}$. $\omega = 2\omega_0 = 2.66 \times 10^4 \text{ rad/s}$.

$X_L = \omega L = (2.66 \times 10^4 \text{ rad/s})(4.50 \times 10^{-3} \text{ H}) = 120 \Omega$. $X_C = \frac{1}{\omega C} = \frac{1}{(2.66 \times 10^4 \text{ rad/s})(1.25 \times 10^{-6} \text{ F})} = 30 \Omega$

$Z = \sqrt{(115 \Omega)^2 + (120 \Omega - 30 \Omega)^2} = 146 \Omega$

(c) $\omega = \omega_0/2 = 6.65 \times 10^3 \text{ rad/s}$. $X_L = 30 \Omega$. $X_C = \frac{1}{\omega C} = 120 \Omega$. $Z = \sqrt{(115 \Omega)^2 + (30 \Omega - 120 \Omega)^2} = 146 \Omega$, the same value as in part (b).

EVALUATE: For $\omega = 2\omega_0$, $X_L > X_C$. For $\omega = \omega_0/2$, $X_L < X_C$. But $(X_L - X_C)^2$ has the same value at these two frequencies, so Z is the same.

31.36. IDENTIFY: At resonance $Z = R$ and $X_L = X_C$.

SET UP: $\omega_0 = \frac{1}{\sqrt{LC}}$. $V = IZ$. $V_R = IR$, $V_L = IX_L$ and $V_C = V_L$.

EXECUTE: (a) $\omega_0 = \frac{1}{\sqrt{LC}} = \frac{1}{\sqrt{(0.280 \text{ H})(4.00 \times 10^{-6} \text{ F})}} = 945 \text{ rad/s}$.

(b) $I = 1.20 \text{ A}$ at resonance, so $R = Z = \frac{V}{I} = \frac{120 \text{ V}}{1.70 \text{ A}} = 70.6 \Omega$

(c) At resonance, $V_R = 120 \text{ V}$, $V_L = V_C = I\omega L = (1.70 \text{ A})(945 \text{ rad/s})(0.280 \text{ H}) = 450 \text{ V}$.

EVALUATE: At resonance, $V_R = V$ and $V_L - V_C = 0$.

31.37. IDENTIFY and SET UP: Eq.(31.35) relates the primary and secondary voltages to the number of turns in each. $I = V/R$ and the power consumed in the resistive load is $I_{\text{rms}}^2 = V_{\text{rms}}^2 / R$.

EXECUTE: (a) $\frac{V_2}{V_1} = \frac{N_2}{N_1}$ so $\frac{N_1}{N_2} = \frac{V_1}{V_2} = \frac{120 \text{ V}}{12.0 \text{ V}} = 10$

(b) $I_2 = \frac{V_2}{R} = \frac{12.0 \text{ V}}{5.00 \Omega} = 2.40 \text{ A}$

(c) $P_{\text{av}} = I_2^2 R = (2.40 \text{ A})^2 (5.00 \Omega) = 28.8 \text{ W}$

(d) The power drawn from the line by the transformer is the 28.8 W that is delivered by the load.

$$P_{\text{av}} = \frac{V^2}{R} \text{ so } R = \frac{V^2}{P_{\text{av}}} = \frac{(120 \text{ V})^2}{28.8 \text{ W}} = 500 \Omega$$

And $\left(\frac{N_1}{N_2}\right)^2 (5.00 \Omega) = (10)^2 (5.00 \Omega) = 500 \Omega$, as was to be shown.

EVALUATE: The resistance is “transformed”. A load of resistance R connected to the secondary draws the same power as a resistance $(N_1/N_2)^2 R$ connected directly to the supply line, without using the transformer.

31.38. IDENTIFY: $P_{\text{av}} = VI$ and $P_{\text{av},1} = P_{\text{av},2}$. $\frac{N_1}{N_2} = \frac{V_1}{V_2}$.

SET UP: $V_1 = 120 \text{ V}$. $V_2 = 13,000 \text{ V}$.

EXECUTE: (a) $\frac{N_2}{N_1} = \frac{V_2}{V_1} = \frac{13,000 \text{ V}}{120 \text{ V}} = 108$

(b) $P_{\text{av}} = V_2 I_2 = (13,000 \text{ V})(8.50 \times 10^{-3} \text{ A}) = 110 \text{ W}$

(c) $I_1 = \frac{P_{\text{av}}}{V_1} = \frac{110 \text{ W}}{120 \text{ V}} = 0.917 \text{ A}$

EVALUATE: Since the power supplied to the primary must equal the power delivered by the secondary, in a step-up transformer the current in the primary is greater than the current in the secondary.

31.39. IDENTIFY: A transformer transforms voltages according to $\frac{V_2}{V_1} = \frac{N_2}{N_1}$. The effective resistance of a secondary

circuit of resistance R is $R_{\text{eff}} = \frac{R}{(N_2/N_1)^2}$. Resistance R is related to P_{av} and V by $P_{\text{av}} = \frac{V^2}{R}$. Conservation of energy requires $P_{\text{av},1} = P_{\text{av},2}$ so $V_1 I_1 = V_2 I_2$.

SET UP: Let $V_1 = 240 \text{ V}$ and $V_2 = 120 \text{ V}$, so $P_{2,\text{av}} = 1600 \text{ W}$. These voltages are rms.

EXECUTE: (a) $V_1 = 240 \text{ V}$ and we want $V_2 = 120 \text{ V}$, so use a step-down transformer with $N_2/N_1 = \frac{1}{2}$.

(b) $P_{\text{av}} = VI$, so $I = \frac{P_{\text{av}}}{V} = \frac{1600 \text{ W}}{240 \text{ V}} = 6.67 \text{ A}$.

(c) The resistance R of the blower is $R = \frac{V^2}{P} = \frac{(120 \text{ V})^2}{1600 \text{ W}} = 9.00 \Omega$. The effective resistance of the blower is

$$R_{\text{eff}} = \frac{9.00 \Omega}{(1/2)^2} = 36.0 \Omega.$$

EVALUATE: $I_2 V_2 = (13.3 \text{ A})(120 \text{ V}) = 1600 \text{ W}$. Energy is provided to the primary at the same rate that it is consumed in the secondary. Step-down transformers step up resistance and the current in the primary is less than the current in the secondary.

31.40. IDENTIFY: $Z = \sqrt{R^2 + (X_L - X_C)^2}$, with $X_L = \omega L$ and $X_C = \frac{1}{\omega C}$.

SET UP: The woofer has a R and L in series and the tweeter has a R and C in series.

EXECUTE: (a) $Z_{\text{tweeter}} = \sqrt{R^2 + (1/\omega C)^2}$

(b) $Z_{\text{woofer}} = \sqrt{R^2 + (\omega L)^2}$

(c) If $Z_{\text{tweeter}} = Z_{\text{woofer}}$, then the current splits evenly through each branch.

(d) At the crossover point, where currents are equal, $R^2 + (1/\omega C)^2 = R^2 + (\omega L)^2$. $\omega = \frac{1}{\sqrt{LC}}$ and

$$f = \frac{\omega}{2\pi} = \frac{1}{2\pi\sqrt{LC}}.$$

EVALUATE: The crossover frequency corresponds to the resonance frequency of a R - C - L circuit, since the crossover frequency is where $X_L = X_C$.

31.41. IDENTIFY and SET UP: Use Eq.(31.24) to relate L and R to ϕ . The voltage across the coil leads the current in it by 52.3° , so $\phi = +52.3^\circ$.

EXECUTE: $\tan \phi = \frac{X_L - X_C}{R}$. But there is no capacitance in the circuit so $X_C = 0$. Thus $\tan \phi = \frac{X_L}{R}$ and $X_L =$

$$R \tan \phi = (48.0 \Omega) \tan 52.3^\circ = 62.1 \Omega. X_L = \omega L = 2\pi f L \text{ so } L = \frac{X_L}{2\pi f} = \frac{62.1 \Omega}{2\pi(80.0 \text{ Hz})} = 0.124 \text{ H}.$$

EVALUATE: $\phi > 45^\circ$ when $(X_L - X_C) > R$, which is the case here.

31.42. IDENTIFY: $Z = \sqrt{R^2 + (X_L - X_C)^2}$. $I_{\text{rms}} = \frac{V_{\text{rms}}}{Z}$. $V_{\text{rms}} = I_{\text{rms}} R$. $V_{C,\text{rms}} = I_{\text{rms}} X_C$. $V_{L,\text{rms}} = I_{\text{rms}} X_L$.

SET UP: $V_{\text{rms}} = \frac{V}{\sqrt{2}} = \frac{30.0 \text{ V}}{\sqrt{2}} = 21.2 \text{ V}$.

EXECUTE: (a) $\omega = 200$ rad/s, so $X_L = \omega L = (200 \text{ rad/s})(0.400 \text{ H}) = 80.0 \Omega$ and

$$X_C = \frac{1}{\omega C} = \frac{1}{(200 \text{ rad/s})(6.00 \times 10^{-6} \text{ F})} = 833 \Omega. \quad Z = \sqrt{(200 \Omega)^2 + (80.0 \Omega - 833 \Omega)^2} = 779 \Omega.$$

$$I_{\text{rms}} = \frac{V_{\text{rms}}}{Z} = \frac{21.2 \text{ V}}{779 \Omega} = 0.0272 \text{ A}. \quad V_1 \text{ reads } V_{R,\text{rms}} = I_{\text{rms}} R = (0.0272 \text{ A})(200 \Omega) = 5.44 \text{ V}. \quad V_2 \text{ reads}$$

$$V_{L,\text{rms}} = I_{\text{rms}} X_L = (0.0272 \text{ A})(80.0 \Omega) = 2.18 \text{ V}. \quad V_3 \text{ reads } V_{C,\text{rms}} = I_{\text{rms}} X_C = (0.0272 \text{ A})(833 \Omega) = 22.7 \text{ V}. \quad V_4 \text{ reads}$$

$$\left| \frac{V_L - V_C}{\sqrt{2}} \right| = |V_{L,\text{rms}} - V_{C,\text{rms}}| = |2.18 \text{ V} - 22.7 \text{ V}| = 20.5 \text{ V}. \quad V_5 \text{ reads } V_{\text{rms}} = 21.2 \text{ V}.$$

(b) $\omega = 1000$ rad/s so $X_L = \omega L = (5)(80.0 \Omega) = 400 \Omega$ and $X_C = \frac{1}{\omega C} = \frac{833 \Omega}{5} = 167 \Omega$.

$$Z = \sqrt{(200 \Omega)^2 + (400 \Omega - 167 \Omega)^2} = 307 \Omega. \quad I_{\text{rms}} = \frac{V_{\text{rms}}}{Z} = \frac{21.2 \text{ V}}{307 \Omega} = 0.0691 \text{ A}. \quad V_1 \text{ reads } V_{R,\text{rms}} = 13.8 \text{ V}. \quad V_2 \text{ reads}$$

$$V_{L,\text{rms}} = 27.6 \text{ V}. \quad V_3 \text{ reads } V_{C,\text{rms}} = 11.5 \text{ V}. \quad V_4 \text{ reads } |V_{L,\text{rms}} - V_{C,\text{rms}}| = |27.6 \text{ V} - 11.5 \text{ V}| = 16.1 \text{ V}. \quad V_5 \text{ reads}$$

$$V_{\text{rms}} = 21.2 \text{ V}.$$

EVALUATE: The resonance frequency for this circuit is $\omega_0 = \frac{1}{\sqrt{LC}} = 645$ rad/s. 200 rad/s is less than the

resonance frequency and $X_C > X_L$. 1000 rad/s is greater than the resonance frequency and $X_L > X_C$.

31.43. IDENTIFY and SET UP: The rectified current equals the absolute value of the current i . Evaluate the integral as specified in the problem.

EXECUTE: (a) From Fig.31.3b, the rectified current is zero at the same values of t for which the sinusoidal current is zero. At these t , $\cos \omega t = 0$ and $\omega t = \pm \pi/2, \pm 3\pi/2, \dots$. The two smallest positive times are

$$t_1 = \pi/2\omega, \quad t_2 = 3\pi/2\omega.$$

$$(b) \quad A = \left| \int_{t_1}^{t_2} i dt \right| = - \int_{t_1}^{t_2} I \cos \omega t dt = -I \left[\frac{1}{\omega} \sin \omega t \right]_{t_1}^{t_2} = -\frac{I}{\omega} (\sin \omega t_2 - \sin \omega t_1)$$

$$\sin \omega t_1 = \sin[\omega(\pi/2\omega)] = \sin(\pi/2) = 1$$

$$\sin \omega t_2 = \sin[\omega(3\pi/2\omega)] = \sin(3\pi/2) = -1$$

$$A = \left(\frac{I}{\omega} \right) (1 - (-1)) = \frac{2I}{\omega}$$

$$(c) \quad I_{\text{rav}}(t_2 - t_1) = 2I/\omega$$

$$I_{\text{rav}} = \frac{2I}{\omega(t_2 - t_1)} = \frac{2I}{\omega(3\pi/2\omega - \pi/2\omega)} = \frac{2I}{\pi}, \text{ which is Eq.(31.3).}$$

EVALUATE: We have shown that Eq.(31.3) is correct. The average rectified current is less than the current amplitude I , since the rectified current varies between 0 and I . The average of the current is zero, since it has both positive and negative values.

31.44. IDENTIFY: $X_L = \omega L$. $P_{\text{av}} = V_{\text{rms}} I_{\text{rms}} \cos \phi$

SET UP: $f = 120$ Hz; $\omega = 2\pi f$.

EXECUTE: (a) $X_L = \omega L \Rightarrow L = \frac{X_L}{\omega} = \frac{250 \Omega}{2\pi(120 \text{ Hz})} = 0.332 \Omega$

(b) $Z = \sqrt{R^2 + X_L^2} = \sqrt{(400 \Omega)^2 + (250 \Omega)^2} = 472 \Omega$. $\cos \phi = \frac{R}{Z}$ and $I_{\text{rms}} = \frac{V_{\text{rms}}}{Z}$. $P_{\text{av}} = \frac{V_{\text{rms}}^2 R}{Z^2}$, so

$$V_{\text{rms}} = Z \sqrt{\frac{P_{\text{av}}}{R}} = (472 \Omega) \sqrt{\frac{800 \text{ W}}{400 \Omega}} = 668 \text{ V}.$$

EVALUATE: $I_{\text{rms}} = \frac{V_{\text{rms}}}{Z} = \frac{668 \text{ V}}{472 \Omega} = 1.415 \text{ A}$. We can calculate P_{av} as $I_{\text{rms}}^2 R = (1.415 \text{ A})^2 (400 \Omega) = 800 \text{ W}$, which checks.

31.45. (a) IDENTIFY and SET UP: Source voltage lags current so it must be that $X_C > X_L$ and we must add an inductor in series with the circuit. When $X_C = X_L$ the power factor has its maximum value of unity, so calculate the additional L needed to raise X_L to equal X_C .

(b) EXECUTE: power factor $\cos\phi$ equals 1 so $\phi = 0$ and $X_C = X_L$. Calculate the present value of $X_C - X_L$ to see how much more X_L is needed: $R = Z \cos\phi = (60.0 \Omega)(0.720) = 43.2 \Omega$

$$\tan\phi = \frac{X_L - X_C}{R} \text{ so } X_L - X_C = R \tan\phi$$

$\cos\phi = 0.720$ gives $\phi = -43.95^\circ$ (ϕ is negative since the voltage lags the current)

Then $X_L - X_C = R \tan\phi = (43.2 \Omega) \tan(-43.95^\circ) = -41.64 \Omega$.

Therefore need to add 41.64Ω of X_L .

$$X_L = \omega L = 2\pi f L \text{ and } L = \frac{X_L}{2\pi f} = \frac{41.64 \Omega}{2\pi(50.0 \text{ Hz})} = 0.133 \text{ H, amount of inductance to add.}$$

EVALUATE: From the information given we can't calculate the original value of L in the circuit, just how much to add. When this L is added the current in the circuit will increase.

31.46. IDENTIFY: Use $V_{\text{rms}} = I_{\text{rms}} Z$ to calculate Z and then find R . $P_{\text{av}} = I_{\text{rms}}^2 R$

SET UP: $X_C = 50.0 \Omega$

$$\text{EXECUTE: } Z = \frac{V_{\text{rms}}}{I_{\text{rms}}} = \frac{240 \text{ V}}{3.00 \text{ A}} = 80.0 \Omega = \sqrt{R^2 + X_C^2} = \sqrt{R^2 + (50.0 \Omega)^2}. \text{ Thus,}$$

$R = \sqrt{(80.0 \Omega)^2 - (50.0 \Omega)^2} = 62.4 \Omega$. The average power supplied to this circuit is equal to the power dissipated by the resistor, which is $P = I_{\text{rms}}^2 R = (3.00 \text{ A})^2 (62.4 \Omega) = 562 \text{ W}$.

$$\text{EVALUATE: } \tan\phi = \frac{X_L - X_C}{R} = \frac{-50.0 \Omega}{62.4 \Omega} \text{ and } \phi = -38.7^\circ.$$

$P_{\text{av}} = V_{\text{rms}} I_{\text{rms}} \cos\phi = (240 \text{ V})(3.00 \text{ A}) \cos(-38.7^\circ) = 562 \text{ W}$, which checks.

31.47. IDENTIFY: The voltage and current amplitudes are the maximum values of these quantities, not necessarily the instantaneous values.

SET UP: The voltage amplitudes are $V_R = RI$, $V_L = X_L I$, and $V_C = X_C I$, where $I = V/Z$ and

$$Z = \sqrt{R^2 + \left(\omega L - \frac{1}{\omega C}\right)^2}.$$

EXECUTE: (a) $\omega = 2\pi f = 2\pi(1250 \text{ Hz}) = 7854 \text{ rad/s}$. Carrying extra figures in the calculator gives $X_L = \omega L = (7854 \text{ rad/s})(3.50 \text{ mH}) = 27.5 \Omega$; $X_C = 1/\omega C = 1/[(7854 \text{ rad/s})(10.0 \mu\text{F})] = 12.7 \Omega$;

$$Z = \sqrt{R^2 + (X_L - X_C)^2} = \sqrt{(50.0 \Omega)^2 + (27.5 \Omega - 12.7 \Omega)^2} = 52.1 \Omega;$$

$I = V/Z = (60.0 \text{ V})/(52.1 \Omega) = 1.15 \text{ A}$; $V_R = RI = (50.0 \Omega)(1.15 \text{ A}) = 57.5 \text{ V}$;

$V_L = X_L I = (27.5 \Omega)(1.15 \text{ A}) = 31.6 \text{ V}$; $V_C = X_C I = (12.7 \Omega)(1.15 \text{ A}) = 14.7 \text{ V}$.

The voltage amplitudes can add to more than 60.0 V because these voltages do not all occur at the same instant of time. At any instant, the instantaneous voltages all add to 60.0 V .

(b) All of them will change because they all depend on ω . $X_L = \omega L$ will double to 55.0Ω , and $X_C = 1/\omega C$ will decrease by half to 6.35Ω . Therefore $Z = \sqrt{(50.0 \Omega)^2 + (55.0 \Omega - 6.35 \Omega)^2} = 69.8 \Omega$; $I = V/Z = (60.0 \text{ V})/(69.8 \Omega) = 0.860 \text{ A}$; $V_R = IR = (0.860 \text{ A})(50.0 \Omega) = 43.0 \text{ V}$;

$V_L = IX_L = (0.860 \text{ A})(55.0 \Omega) = 47.3 \text{ V}$; $V_C = IX_C = (0.860 \text{ A})(6.35 \Omega) = 5.47 \text{ V}$.

EVALUATE: The new amplitudes in part (b) are not simple multiples of the values in part (a) because the impedance and reactances are not all the same simple multiple of the angular frequency.

31.48. IDENTIFY and SET UP: $X_C = \frac{1}{\omega C}$. $X_L = \omega L$.

EXECUTE: (a) $\frac{1}{\omega_1 C} = \omega_1 L$ and $LC = \frac{1}{\omega_1^2}$. At angular frequency ω_2 , $\frac{X_L}{X_C} = \frac{\omega_2 L}{1/\omega_2 C} = \omega_2^2 LC = (2\omega_1)^2 \frac{1}{\omega_1^2} = 4$.

$X_L > X_C$.

(b) At angular frequency ω_3 , $\frac{X_L}{X_C} = \omega_3^2 LC = \left(\frac{\omega_1}{3}\right)^2 \left(\frac{1}{\omega_1^2}\right) = \frac{1}{9}$. $X_C > X_L$.

EVALUATE: When ω increases, X_L increases and X_C decreases. When ω decreases, X_L decreases and X_C increases.

(c) The resonance angular frequency ω_0 is the value of ω for which $X_C = X_L$, so $\omega_0 = \omega_1$.

31.49. IDENTIFY and SET UP: Express Z and I in terms of ω , L , C and R . The voltages across the resistor and the inductor are 90° out of phase, so $V_{\text{out}} = \sqrt{V_R^2 + V_L^2}$.

EXECUTE: The circuit is sketched in Figure 31.49.

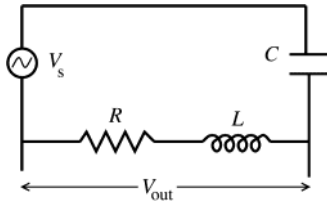


Figure 31.49

$$X_L = \omega L, X_C = \frac{1}{\omega C}$$

$$Z = \sqrt{R^2 + \left(\omega L - \frac{1}{\omega C}\right)^2}$$

$$I = \frac{V_s}{Z} = \frac{V_s}{\sqrt{R^2 + \left(\omega L - \frac{1}{\omega C}\right)^2}}$$

$$V_{\text{out}} = I\sqrt{R^2 + X_L^2} = I\sqrt{R^2 + \omega^2 L^2} = V_s \frac{\sqrt{R^2 + \omega^2 L^2}}{\sqrt{R^2 + \left(\omega L - \frac{1}{\omega C}\right)^2}}$$

$$\frac{V_{\text{out}}}{V_s} = \frac{\sqrt{R^2 + \omega^2 L^2}}{\sqrt{R^2 + \left(\omega L - \frac{1}{\omega C}\right)^2}}$$

ω small

As ω gets small, $R^2 + \left(\omega L - \frac{1}{\omega C}\right)^2 \rightarrow \frac{1}{\omega^2 C^2}$, $R^2 + \omega^2 L^2 \rightarrow R^2$

Therefore $\frac{V_{\text{out}}}{V_s} \rightarrow \sqrt{\frac{R^2}{(1/\omega^2 C^2)}} = \omega RC$ as ω becomes small.

ω large

As ω gets large, $R^2 + \left(\omega L - \frac{1}{\omega C}\right)^2 \rightarrow R^2 + \omega^2 L^2 \rightarrow \omega^2 L^2$, $R^2 + \omega^2 L^2 \rightarrow \omega^2 L^2$

Therefore, $\frac{V_{\text{out}}}{V_s} \rightarrow \sqrt{\frac{\omega^2 L^2}{\omega^2 L^2}} = 1$ as ω becomes large.

EVALUATE: $V_{\text{out}}/V_s \rightarrow 0$ as ω becomes small, so there is V_{out} only when the frequency ω of V_s is large. If the source voltage contains a number of frequency components, only the high frequency ones are passed by this filter.

31.50. IDENTIFY: $V = V_C = IX_C$. $I = V/Z$.

SET UP: $X_L = \omega L$, $X_C = \frac{1}{\omega C}$.

EXECUTE: $V_{\text{out}} = V_C = \frac{I}{\omega C} \Rightarrow \frac{V_{\text{out}}}{V_s} = \frac{1}{\omega C \sqrt{R^2 + (\omega L - 1/\omega C)^2}}$.

If ω is large: $\frac{V_{\text{out}}}{V_s} = \frac{1}{\omega C \sqrt{R^2 + (\omega L - 1/\omega C)^2}} \approx \frac{1}{\omega C \sqrt{(\omega L)^2}} = \frac{1}{(LC)\omega^2}$.

If ω is small: $\frac{V_{\text{out}}}{V_s} \approx \frac{1}{\omega C \sqrt{(1/\omega C)^2}} = \frac{\omega C}{\omega C} = 1$.

EVALUATE: When ω is large, X_C is small and X_L is large so Z is large and the current is small. Both factors in $V_C = IX_C$ are small. When ω is small, X_C is large and the voltage amplitude across the capacitor is much larger than the voltage amplitudes across the resistor and the inductor.

31.51. IDENTIFY: $I = V/Z$ and $P_{\text{av}} = \frac{1}{2} I^2 R$.

SET UP: $Z = \sqrt{R^2 + (\omega L - 1/\omega C)^2}$

EXECUTE: (a) $I = \frac{V}{Z} = \frac{V}{\sqrt{R^2 + (\omega L - 1/\omega C)^2}}$.

$$(b) P_{av} = \frac{1}{2} I^2 R = \frac{1}{2} \left(\frac{V}{Z} \right)^2 R = \frac{V^2 R / 2}{R^2 + (\omega L - 1/\omega C)^2}.$$

(c) The average power and the current amplitude are both greatest when the denominator is smallest, which occurs for $\omega_0 L = \frac{1}{\omega_0 C}$, so $\omega_0 = \frac{1}{\sqrt{LC}}$.

$$(d) P_{av} = \frac{(100 \text{ V})^2 (200 \Omega) / 2}{(200 \Omega)^2 + (\omega(2.00 \text{ H}) - 1/[\omega(0.500 \times 10^{-6} \text{ F})])^2} = \frac{25\omega^2}{40,000\omega^2 + (2\omega^2 - 2,000,000)^2}.$$

The graph of P_{av} versus ω is sketched in Figure 31.51.

EVALUATE: Note that as the angular frequency goes to zero, the power and current are zero, just as they are when the angular frequency goes to infinity. This graph exhibits the same strongly peaked nature as the light purple curve in Figure 31.19 in the textbook.

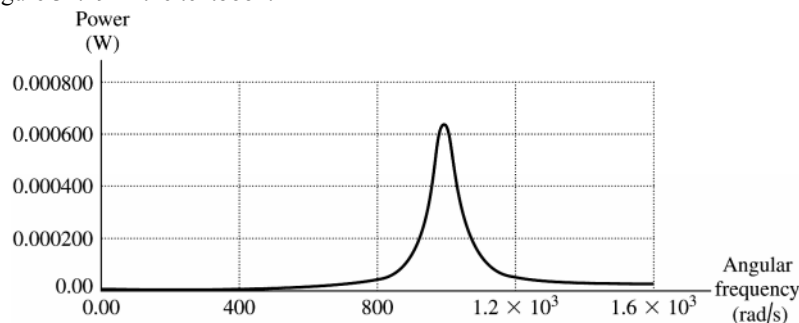


Figure 31.51

31.52. **IDENTIFY:** $V_L = I\omega L$ and $V_C = \frac{I}{\omega C}$.

SET UP: Problem 31.51 shows that $I = \frac{V}{\sqrt{R^2 + (\omega L - 1/[\omega C])^2}}$.

EXECUTE: (a) $V_L = I\omega L = \frac{V\omega L}{Z} = \frac{V\omega L}{\sqrt{R^2 + (\omega L - 1/[\omega C])^2}}$.

(b) $V_C = \frac{I}{\omega C} = \frac{I}{\omega C Z} = \frac{1}{\omega C \sqrt{R^2 + (\omega L - 1/[\omega C])^2}}$.

(c) The graphs are given in Figure 31.52.

EVALUATE: (d) When the angular frequency is zero, the inductor has zero voltage while the capacitor has voltage of 100 V (equal to the total source voltage). At very high frequencies, the capacitor voltage goes to zero, while the inductor's voltage goes to 100 V. At resonance, $\omega_0 = \frac{1}{\sqrt{LC}} = 1000 \text{ rad/s}$, the two voltages are equal, and are a maximum, 1000 V.

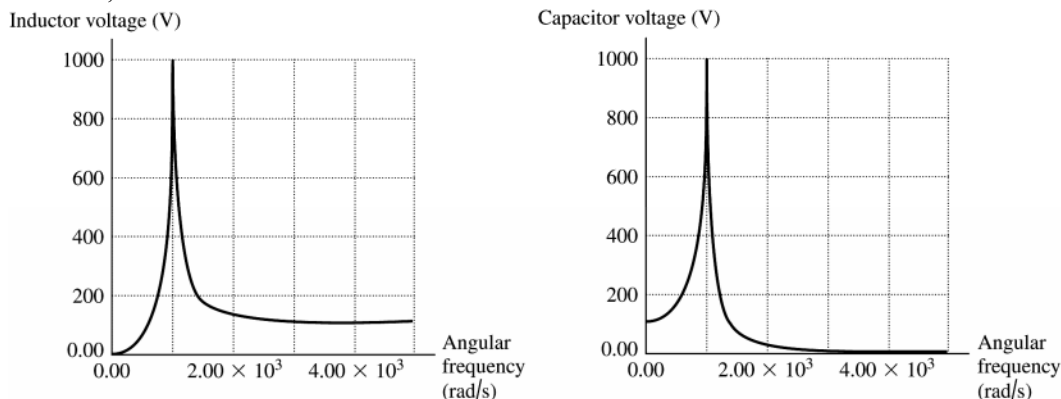


Figure 31.52

31.53. IDENTIFY: $U_B = \frac{1}{2}Li^2$. $U_E = \frac{1}{2}Cv^2$.

SET UP: Let $\langle x \rangle$ denote the average value of the quantity x . $\langle i^2 \rangle = \frac{1}{2}I^2$ and $\langle v_C^2 \rangle = \frac{1}{2}V_C^2$. Problem 31.51 shows that $I = \frac{V}{\sqrt{R^2 + (\omega L - 1/\omega C)^2}}$. Problem 31.52 shows that $V_C = \frac{V}{\omega C \sqrt{R^2 + (\omega L - 1/\omega C)^2}}$.

EXECUTE: (a) $U_B = \frac{1}{2}Li^2 \Rightarrow \langle U_B \rangle = \frac{1}{2}L \langle i^2 \rangle = \frac{1}{2}LI_{\text{rms}}^2 = \frac{1}{2}L \left(\frac{I}{\sqrt{2}} \right)^2 = \frac{1}{4}LI^2$.

$$U_E = \frac{1}{2}Cv_C^2 \Rightarrow \langle U_E \rangle = \frac{1}{2}C \langle v_C^2 \rangle = \frac{1}{2}CV_{C,\text{rms}}^2 = \frac{1}{2}C \left(\frac{V_C}{\sqrt{2}} \right)^2 = \frac{1}{4}CV_C^2$$

(b) Using Problem 31.51a

$$\langle U_B \rangle = \frac{1}{4}LI^2 = \frac{1}{4}L \left(\frac{V^2}{\sqrt{R^2 + (\omega L - 1/\omega C)^2}} \right)^2 = \frac{LV^2}{4(R^2 + (\omega L - 1/\omega C)^2)}$$

$$\text{Using Problem (31.47b): } \langle U_E \rangle = \frac{1}{4}CV_C^2 = \frac{1}{4}C \frac{V^2}{\omega^2 C^2 (R^2 + (\omega L - 1/\omega C)^2)} = \frac{V^2}{4\omega^2 C (R^2 + (\omega L - 1/\omega C)^2)}$$

(c) The graphs of the magnetic and electric energies are given in Figure 31.53.

EVALUATE: (d) When the angular frequency is zero, the magnetic energy stored in the inductor is zero, while the electric energy in the capacitor is $U_E = CV^2/4$. As the frequency goes to infinity, the energy noted in both inductor and capacitor go to zero. The energies equal each other at the resonant frequency where $\omega_0 = \frac{1}{\sqrt{LC}}$ and

$$U_B = U_E = \frac{LV^2}{4R^2}$$

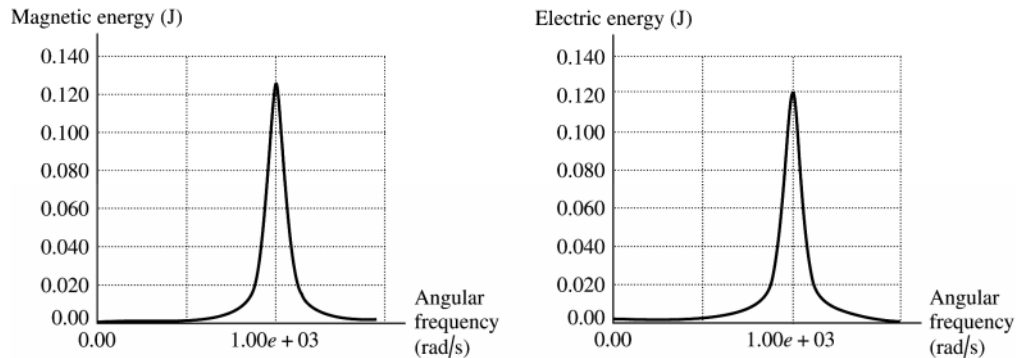


Figure 31.53

31.54. IDENTIFY: At any instant of time the same rules apply to the parallel ac circuit as to parallel dc circuit: the voltages are the same and the currents add.

SET UP: For a resistor the current and voltage in phase. For an inductor the voltage leads the current by 90° and for a capacitor the voltage lags the current by 90° .

EXECUTE: (a) The parallel L - R - C circuit must have equal potential drops over the capacitor, inductor and resistor, so $v_R = v_L = v_C = v$. Also, the sum of currents entering any junction must equal the current leaving the junction. Therefore, the sum of the currents in the branches must equal the current through the source: $i = i_R + i_L + i_C$.

(b) $i_R = \frac{v}{R}$ is always in phase with the voltage. $i_L = \frac{v}{\omega L}$ lags the voltage by 90° , and $i_C = v\omega C$ leads the voltage by 90° . The phase diagram is sketched in Figure 31.54.

(c) From the diagram, $I^2 = I_R^2 + (I_C - I_L)^2 = \left(\frac{V}{R} \right)^2 + \left(V\omega C - \frac{V}{\omega L} \right)^2$.

(d) From part (c): $I = V \sqrt{\frac{1}{R^2} + \left(\omega C - \frac{1}{\omega L} \right)^2}$. But $I = \frac{V}{Z}$, so $\frac{1}{Z} = \sqrt{\frac{1}{R^2} + \left(\omega C - \frac{1}{\omega L} \right)^2}$.

EVALUATE: For large ω , $Z \rightarrow \frac{1}{\omega C}$. The current in the capacitor branch is much larger than the current in the other branches. For small ω , $Z \rightarrow \omega L$. The current in the inductive branch is much larger than the current in the other branches.

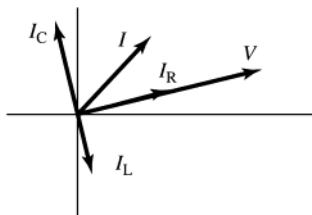


Figure 31.54

31.55. IDENTIFY: Apply the expression for I from problem 31.54 when $\omega_0 = 1/\sqrt{LC}$.

SET UP: From Problem 31.54, $I = V \sqrt{\frac{1}{R^2} + \left(\omega C - \frac{1}{\omega L}\right)^2}$

EXECUTE: (a) At resonance, $\omega_0 = \frac{1}{\sqrt{LC}} \Rightarrow \omega_0 C = \frac{1}{\omega_0 L} \Rightarrow I_C = V \omega_0 C = \frac{V}{\omega_0 L} = I_L$ so $I = I_R$ and I is a minimum.

(b) $P_{\text{av}} = \frac{V_{\text{rms}}^2}{Z} \cos \phi = \frac{V^2}{R}$ at resonance where $R < Z$ so power is a maximum.

(c) At $\omega = \omega_0$, I and V are in phase, so the phase angle is zero, which is the same as a series resonance.

EVALUATE: (d) The parallel circuit is sketched in Figure 31.55. At resonance, $|i_C| = |i_L|$ and at any instant of time these two currents are in opposite directions. Therefore, the net current between a and b is always zero.

(e) If the inductor and capacitor each have some resistance, and these resistances aren't the same, then it is no longer true that $i_C + i_L = 0$ and the statement in part (d) isn't valid.

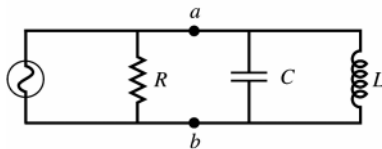


Figure 31.55

31.56. IDENTIFY: Refer to the results and the phasor diagram in Problem 31.54. The source voltage is applied across each parallel branch.

SET UP: $V = \sqrt{2}V_{\text{rms}} = 311 \text{ V}$

EXECUTE: (a) $I_R = \frac{V}{R} = \frac{311 \text{ V}}{400 \Omega} = 0.778 \text{ A}$.

(b) $I_C = V\omega C = (311 \text{ V})(360 \text{ rad/s})(6.00 \times 10^{-6} \text{ F}) = 0.672 \text{ A}$.

(c) $\phi = \arctan\left(\frac{I_C}{I_R}\right) = \arctan\left(\frac{0.672 \text{ A}}{0.778 \text{ A}}\right) = 40.8^\circ$.

(d) $I = \sqrt{I_R^2 + I_C^2} = \sqrt{(0.778 \text{ A})^2 + (0.672 \text{ A})^2} = 1.03 \text{ A}$.

(e) Leads since $\phi > 0$.

EVALUATE: The phasor diagram shows that the current in the capacitor always leads the source voltage.

31.57. IDENTIFY and SET UP: Refer to the results and the phasor diagram in Problem 31.54. The source voltage is applied across each parallel branch.

EXECUTE: (a) $I_R = \frac{V}{R}$; $I_C = V\omega C$; $I_L = \frac{V}{\omega L}$.

(b) The graph of each current versus ω is given in Figure 31.57a.

(c) $\omega \rightarrow 0$: $I_C \rightarrow 0$; $I_L \rightarrow \infty$. $\omega \rightarrow \infty$: $I_C \rightarrow \infty$; $I_L \rightarrow 0$.

At low frequencies, the current is not changing much so the inductor's back-emf doesn't "resist." This allows the current to pass fairly freely. However, the current in the capacitor goes to zero because it tends to "fill up" over the slow period, making it less effective at passing charge. At high frequency, the induced emf in the inductor resists the violent changes and passes little current. The capacitor never gets a chance to fill up so passes charge freely.

(d) $\omega = \frac{1}{\sqrt{LC}} = \frac{1}{\sqrt{(2.0 \text{ H})(0.50 \times 10^{-6} \text{ F})}} = 1000 \text{ rad/sec}$ and $f = 159 \text{ Hz}$. The phasor diagram is sketched in

Figure 31.57b.

$$(e) I = \sqrt{\left(\frac{V}{R}\right)^2 + \left(V\omega C - \frac{V}{\omega L}\right)^2}$$

$$I = \sqrt{\left(\frac{100 \text{ V}}{200 \Omega}\right)^2 + \left((100 \text{ V})(1000 \text{ s}^{-1})(0.50 \times 10^{-6} \text{ F}) - \frac{100 \text{ V}}{(1000 \text{ s}^{-1})(2.0 \text{ H})}\right)^2} = 0.50 \text{ A}$$

(f) At resonance $I_L = I_C = V\omega C = (100 \text{ V})(1000 \text{ s}^{-1})(0.50 \times 10^{-6} \text{ F}) = 0.0500 \text{ A}$ and $I_R = \frac{V}{R} = \frac{100 \text{ V}}{200 \Omega} = 0.50 \text{ A}$.

EVALUATE: At resonance $i_c = i_l = 0$ at all times and the current through the source equals the current through the resistor.

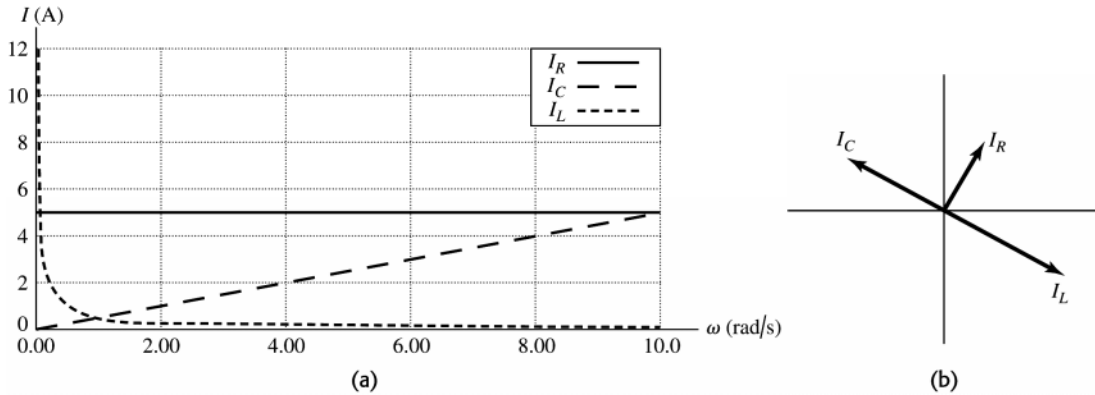


Figure 31.57

31.58. IDENTIFY: The average power depends on the phase angle ϕ .

SET UP: The average power is $P_{av} = V_{rms}I_{rms}\cos\phi$, and the impedance is $Z = \sqrt{R^2 + \left(\omega L - \frac{1}{\omega C}\right)^2}$.

EXECUTE: (a) $P_{av} = V_{rms}I_{rms}\cos\phi = \frac{1}{2}(V_{rms}I_{rms})$, which gives $\cos\phi = \frac{1}{2}$, so $\phi = \pi/3 = 60^\circ$. $\tan\phi = (X_L - X_C)/R$, which gives $\tan 60^\circ = (\omega L - 1/\omega C)/R$. Using $R = 75.0 \Omega$, $L = 5.00 \text{ mH}$, and $C = 2.50 \mu\text{F}$ and solving for ω we get $\omega = 28760 \text{ rad/s} = 28,800 \text{ rad/s}$.

(b) $Z = \sqrt{R^2 + (X_L - X_C)^2}$, where $X_L = \omega L = (28,760 \text{ rad/s})(5.00 \text{ mH}) = 144 \Omega$ and

$X_C = 1/\omega C = 1/[(28,760 \text{ rad/s})(2.50 \mu\text{F})] = 13.9 \Omega$, giving $Z = \sqrt{(75 \Omega)^2 + (144 \Omega - 13.9 \Omega)^2} = 150 \Omega$;

$I = V/Z = (15.0 \text{ V})/(150 \Omega) = 0.100 \text{ A}$ and $P_{av} = \frac{1}{2}VI\cos\phi = \frac{1}{2}(15.0 \text{ V})(0.100 \text{ A})(1/2) = 0.375 \text{ W}$.

EVALUATE: All this power is dissipated in the resistor because the average power delivered to the inductor and capacitor is zero.

31.59. IDENTIFY: We know R , X_C and ϕ so Eq.(31.24) tells us X_L . Use $P_{av} = I_{rms}^2 R$ from Exercise 31.27 to calculate I_{rms} . Then calculate Z and use Eq.(31.26) to calculate V_{rms} for the source.

SET UP: Source voltage lags current so $\phi = -54.0^\circ$. $X_C = 350 \Omega$, $R = 180 \Omega$, $P_{av} = 140 \text{ W}$

EXECUTE: (a) $\tan\phi = \frac{X_L - X_C}{R}$

$$X_L = R \tan\phi + X_C = (180 \Omega)\tan(-54.0^\circ) + 350 \Omega = -248 \Omega + 350 \Omega = 102 \Omega$$

(b) $P_{av} = V_{rms}I_{rms}\cos\phi = I_{rms}^2 R$ (Exercise 31.27). $I_{rms} = \sqrt{\frac{P_{av}}{R}} = \sqrt{\frac{140 \text{ W}}{180 \Omega}} = 0.882 \text{ A}$

(c) $Z = \sqrt{R^2 + (X_L - X_C)^2} = \sqrt{(180 \Omega)^2 + (102 \Omega - 350 \Omega)^2} = 306 \Omega$

$$V_{rms} = I_{rms}Z = (0.882 \text{ A})(306 \Omega) = 270 \text{ V}.$$

EVALUATE: We could also use Eq.(31.31): $P_{av} = V_{rms}I_{rms}\cos\phi$

$$V_{rms} = \frac{P_{av}}{I_{rms}\cos\phi} = \frac{140 \text{ W}}{(0.882 \text{ A})\cos(-54.0^\circ)} = 270 \text{ V}, \text{ which agrees. The source voltage lags the current when}$$

$X_C > X_L$, and this agrees with what we found.

31.60. IDENTIFY and SET UP: Calculate Z and $I = V/Z$.

EXECUTE: (a) For $\omega = 800$ rad/s:

$$Z = \sqrt{R^2 + (\omega L - 1/\omega C)^2} = \sqrt{(500 \Omega)^2 + ((800 \text{ rad/s})(2.0 \text{ H}) - 1/((800 \text{ rad/s})(5.0 \times 10^{-7} \text{ F})))^2}. \quad Z = 1030 \Omega.$$

$$I = \frac{V}{Z} = \frac{100 \text{ V}}{1030 \Omega} = 0.0971 \text{ A}. \quad V_R = IR = (0.0971 \text{ A})(500 \Omega) = 48.6 \text{ V}, \quad V_C = \frac{1}{\omega C} = \frac{0.0971 \text{ A}}{(800 \text{ rad/s})(5.0 \times 10^{-7} \text{ F})} = 243 \text{ V}$$

and $V_L = I\omega L = (0.0971 \text{ A})(800 \text{ rad/s})(2.00 \text{ H}) = 155 \text{ V}$. $\phi = \arctan\left(\frac{\omega L - 1/(\omega C)}{R}\right) = -60.9^\circ$. The graph of each

voltage versus time is given in Figure 31.60a.

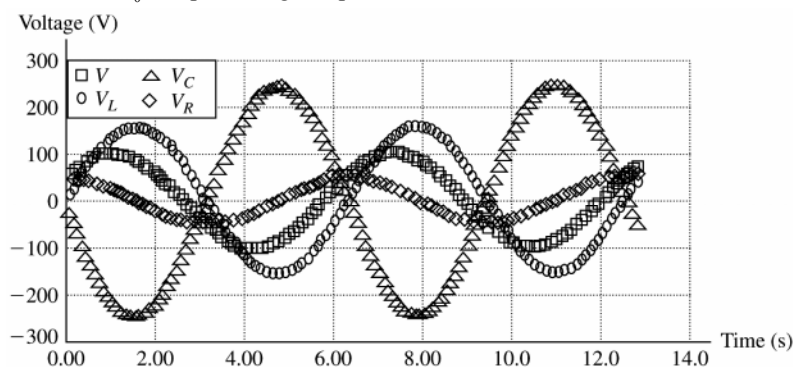
(b) Repeating exactly the same calculations as above for $\omega = 1000$ rad/s:

$Z = R = 500 \Omega$; $\phi = 0$; $I = 0.200 \text{ A}$; $V_R = V = 100 \text{ V}$; $V_C = V_L = 400 \text{ V}$. The graph of each voltage versus time is given in Figure 31.60b.

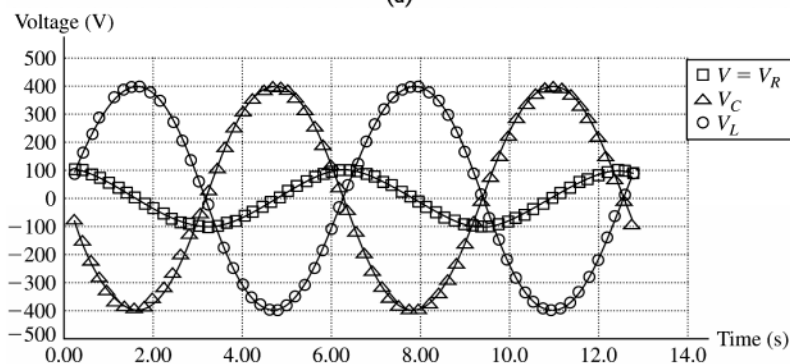
(c) Repeating exactly the same calculations as part (a) for $\omega = 1250$ rad/s:

$Z = R = 1030 \Omega$; $\phi = +60.9^\circ$; $I = 0.0971 \text{ A}$; $V_R = 48.6 \text{ V}$; $V_C = 155 \text{ V}$; $V_L = 243 \text{ V}$. The graph of each voltage versus time is given in Figure 31.60c.

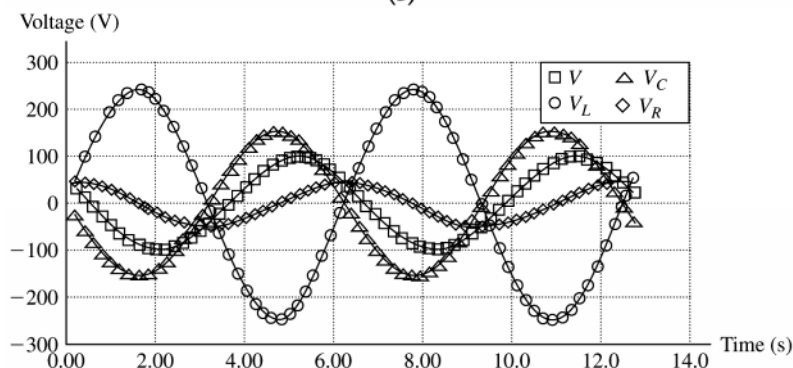
EVALUATE: The resonance frequency is $\omega_0 = \frac{1}{\sqrt{LC}} = \frac{1}{\sqrt{(2.00 \text{ H})(0.500 \mu\text{F})}} = 1000 \text{ rad/s}$. For $\omega < \omega_0$ the phase angle is negative and for $\omega > \omega_0$ the phase angle is positive.



(a)



(b)



(c)

Figure 31.60

31.61. IDENTIFY and SET UP: Eq.(31.19) allows us to calculate I and then Eq.(31.22) gives Z . Solve Eq.(31.21) for L .

EXECUTE: (a) $V_C = IX_C$ so $I = \frac{V_C}{X_C} = \frac{360 \text{ V}}{480 \Omega} = 0.750 \text{ A}$

(b) $V = IZ$ so $Z = \frac{V}{I} = \frac{120 \text{ V}}{0.750 \text{ A}} = 160 \Omega$

(c) $Z^2 = R^2 + (X_L - X_C)^2$

$X_L - X_C = \pm\sqrt{Z^2 - R^2}$, so

$X_L = X_C \pm \sqrt{Z^2 - R^2} = 480 \Omega \pm \sqrt{(160 \Omega)^2 - (80.0 \Omega)^2} = 480 \Omega \pm 139 \Omega$

$X_L = 619 \Omega$ or 341Ω

(d) **EVALUATE:** $X_C = \frac{1}{\omega C}$ and $X_L = \omega L$. At resonance, $X_C = X_L$. As the frequency is lowered below the

resonance frequency X_C increases and X_L decreases. Therefore, for $\omega < \omega_0$, $X_L < X_C$. So for $X_L = 341 \Omega$ the angular frequency is less than the resonance angular frequency. ω is greater than ω_0 when $X_L = 619 \Omega$. But at these two values of X_L , the magnitude of $X_L - X_C$ is the same so Z and I are the same. In one case ($X_L = 619 \Omega$) the source voltage leads the current and in the other ($X_L = 341 \Omega$) the source voltage lags the current.

31.62. IDENTIFY and SET UP: The maximum possible current amplitude occurs at the resonance angular frequency because the impedance is then smallest.

EXECUTE: (a) At the resonance angular frequency $\omega_0 = 1/\sqrt{LC}$, the current is a maximum and $Z = R$, giving $I_{\max} = V/R$. At the required frequency, $I = I_{\max}/3$. $I = V/Z = I_{\max}/3 = (V/R)/3$, which means that $Z = 3R$. Squaring gives $R^2 + (\omega L - 1/\omega C)^2 = 9R^2$. Solving for ω gives $\omega = 3.192 \times 10^5 \text{ rad/s}$ and $\omega = 8.35 \times 10^4 \text{ rad/s}$.

(b) $V = \sqrt{2}V_{\text{rms}} = \sqrt{2}(35.0 \text{ V}) = 49.5 \text{ V}$. $I = \frac{I_{\max}}{3} = \frac{V}{3R} = \frac{49.5 \text{ V}}{3(125 \Omega)} = 0.132 \text{ A}$.

For $\omega = 8.35 \times 10^4 \text{ rad/s}$: $R = 125 \Omega$ and $V_R = IR = 16.5 \text{ V}$; $X_L = \omega L = 125 \Omega$ and $V_L = 16.5 \text{ V}$;

$X_C = \frac{1}{\omega C} = 479 \Omega$ and $V_C = 63.2 \text{ V}$.

For $\omega = 3.192 \times 10^5 \text{ rad/s}$: $R = 125 \Omega$ and $V_R = IR = 16.5 \text{ V}$; $X_L = \omega L = 479 \Omega$ and $V_L = 63.2 \text{ V}$;

$X_C = \frac{1}{\omega C} = 125 \Omega$ and $V_C = 16.5 \text{ V}$.

EVALUATE: For the lower frequency, $X_C > X_L$ and $V_C > V_L$. For the higher frequency, $X_L > X_C$ and $V_L > V_C$.

31.63. IDENTIFY and SET UP: Consider the cycle of the repeating current that lies between $t_1 = \tau/2$ and $t_2 = 3\tau/2$. In

this interval $i = \frac{2I_0}{\tau}(t - \tau)$. $I_{\text{av}} = \frac{1}{t_2 - t_1} \int_{t_1}^{t_2} i dt$ and $I_{\text{rms}}^2 = \frac{1}{t_2 - t_1} \int_{t_1}^{t_2} i^2 dt$

EXECUTE: $I_{\text{av}} = \frac{1}{t_2 - t_1} \int_{t_1}^{t_2} i dt = \frac{1}{\tau} \int_{\tau/2}^{3\tau/2} \frac{2I_0}{\tau}(t - \tau) dt = \frac{2I_0}{\tau^2} \left[\frac{1}{2}t^2 - \tau t \right]_{\tau/2}^{3\tau/2}$

$I_{\text{av}} = \left(\frac{2I_0}{\tau^2} \right) \left(\frac{9\tau^2}{8} - \frac{3\tau^2}{2} - \frac{\tau^2}{8} + \frac{\tau^2}{2} \right) = (2I_0) \frac{1}{8} (9 - 12 - 1 + 4) = \frac{I_0}{4} (13 - 13) = 0$.

$I_{\text{rms}}^2 = (I^2)_{\text{av}} = \frac{1}{t_2 - t_1} \int_{t_1}^{t_2} i^2 dt = \frac{1}{\tau} \int_{\tau/2}^{3\tau/2} \frac{4I_0^2}{\tau^2} (t - \tau)^2 dt$

$I_{\text{rms}}^2 = \frac{4I_0^2}{\tau^3} \int_{\tau/2}^{3\tau/2} (t - \tau)^2 dt = \frac{4I_0^2}{\tau^3} \left[\frac{1}{3}(t - \tau)^3 \right]_{\tau/2}^{3\tau/2} = \frac{4I_0^2}{3\tau^3} \left[\left(\frac{\tau}{2} \right)^3 - \left(-\frac{\tau}{2} \right)^3 \right]$

$I_{\text{rms}}^2 = \frac{I_0^2}{6} [1 + 1] = \frac{1}{3} I_0^2$

$I_{\text{rms}} = \sqrt{I_{\text{rms}}^2} = \frac{I_0}{\sqrt{3}}$.

EVALUATE: In each cycle the current has as much negative value as positive value and its average is zero. i^2 is always positive and its average is not zero. The relation between I_{rms} and the current amplitude for this current is different from that for a sinusoidal current (Eq.31.4).

31.64. IDENTIFY: Apply $V_{\text{rms}} = I_{\text{rms}}Z$

SET UP: $\omega_0 = \frac{1}{\sqrt{LC}}$ and $Z = \sqrt{R^2 + (X_L - X_C)^2}$.

EXECUTE: (a) $\omega_0 = \frac{1}{\sqrt{LC}} = \frac{1}{\sqrt{(1.80 \text{ H})(9.00 \times 10^{-7} \text{ F})}} = 786 \text{ rad/s}$.

(b) $Z = \sqrt{R^2 + (\omega L - 1/\omega C)^2}$. $Z = \sqrt{(300 \Omega)^2 + ((786 \text{ rad/s})(1.80 \text{ H}) - 1/((786 \text{ rad/s})(9.00 \times 10^{-7} \text{ F})))^2} = 300 \Omega$.

$I_{\text{rms-0}} = \frac{V_{\text{rms}}}{Z} = \frac{60 \text{ V}}{300 \Omega} = 0.200 \text{ A}$.

(c) We want $I = \frac{1}{2}I_{\text{rms-0}} = \frac{V_{\text{rms}}}{Z} = \frac{V_{\text{rms}}}{\sqrt{R^2 + (\omega L - 1/\omega C)^2}}$. $R^2 + (\omega L - 1/\omega C)^2 = \frac{4V_{\text{rms}}^2}{I_{\text{rms-0}}^2}$.

$\omega^2 L^2 + \frac{1}{\omega^2 C^2} - \frac{2L}{C} + R^2 - \frac{4V_{\text{rms}}^2}{I_{\text{rms-0}}^2} = 0$ and $(\omega^2)^2 L^2 + \omega^2 \left(R^2 - \frac{2L}{C} - \frac{4V_{\text{rms}}^2}{I_{\text{rms-0}}^2} \right) + \frac{1}{C^2} = 0$.

Substituting in the values for this problem, the equation becomes $(\omega^2)^2(3.24) + \omega^2(-4.27 \times 10^6) + 1.23 \times 10^{12} = 0$.

Solving this quadratic equation in ω^2 we find $\omega^2 = 8.90 \times 10^5 \text{ rad}^2/\text{s}^2$ or $4.28 \times 10^5 \text{ rad}^2/\text{s}^2$ and

$\omega = 943 \text{ rad/s}$ or 654 rad/s .

(d) (i) $R = 300 \Omega$, $I_{\text{rms-0}} = 0.200 \text{ A}$, $|\omega_1 - \omega_2| = 289 \text{ rad/s}$. (ii) $R = 30 \Omega$, $I_{\text{rms-0}} = 2 \text{ A}$, $|\omega_1 - \omega_2| = 28 \text{ rad/s}$.

(iii) $R = 3 \Omega$, $I_{\text{rms-0}} = 20 \text{ A}$, $|\omega_1 - \omega_2| = 2.88 \text{ rad/s}$.

EVALUATE: The width gets smaller as R gets smaller; $I_{\text{rms-0}}$ gets larger as R gets smaller.

31.65. IDENTIFY: The resonance frequency, the reactances, and the impedance all depend on the values of the circuit elements.

SET UP: The resonance frequency is $\omega_0 = 1/\sqrt{LC}$, the reactances are $X_L = \omega L$ and $X_C = 1/\omega C$, and the impedance is $Z = \sqrt{R^2 + (X_L - X_C)^2}$.

EXECUTE: (a) $\omega_0 = 1/\sqrt{LC}$ becomes $\frac{1}{\sqrt{2L}\sqrt{2C}} \rightarrow 1/2$, so ω_0 decreases by $\frac{1}{2}$.

(b) Since $X_L = \omega L$, if L is doubled, X_L increases by a factor of 2.

(c) Since $X_C = 1/\omega C$, doubling C decreases X_C by a factor of $\frac{1}{2}$.

(d) $Z = \sqrt{R^2 + (X_L - X_C)^2} \rightarrow Z = \sqrt{(2R)^2 + (2X_L - \frac{1}{2}X_C)^2}$, so Z does not change by a simple factor of 2 or $\frac{1}{2}$.

EVALUATE: The impedance does not change by a simple factor, even though the other quantities do.

31.66. IDENTIFY: A transformer transforms voltages according to $\frac{V_2}{V_1} = \frac{N_2}{N_1}$. The effective resistance of a secondary

circuit of resistance R is $R_{\text{eff}} = \frac{R}{(N_2/N_1)^2}$.

SET UP: $N_2 = 275$ and $V_1 = 25.0 \text{ V}$.

EXECUTE: (a) $V_2 = V_1(N_2/N_1) = (25.0 \text{ V})(834/275) = 75.8 \text{ V}$

(b) $R_{\text{eff}} = \frac{R}{(N_2/N_1)^2} = \frac{125 \Omega}{(834/275)^2} = 13.6 \Omega$

EVALUATE: The voltage across the secondary is greater than the voltage across the primary since $N_2 > N_1$. The effective load resistance of the secondary is less than the resistance R connected across the secondary.

31.67. IDENTIFY: The resonance angular frequency is $\omega_0 = \frac{1}{\sqrt{LC}}$ and the resonance frequency is $f_0 = \frac{1}{2\pi\sqrt{LC}}$.

SET UP: ω_0 is independent of R .

EXECUTE: (a) ω_0 (or f_0) depends only on L and C so change these quantities.

(b) To double ω_0 , decrease L and C by multiplying each of them by $\frac{1}{2}$.

EVALUATE: Increasing L and C decreases the resonance frequency; decreasing L and C increases the resonance frequency.

31.68. IDENTIFY: At resonance, $Z = R$. $I = V/R$. $V_R = IR$, $V_C = IX_C$ and $V_L = IX_L$. $U_E = \frac{1}{2}CV_C^2$ and $U_L = \frac{1}{2}LI^2$.

SET UP: The amplitudes of each time dependent quantity correspond to the maximum values of those quantities.

EXECUTE: (a) $I = \frac{V}{Z} = \frac{V}{\sqrt{R^2 + (\omega L - 1/\omega C)^2}}$. At resonance $\omega L = \frac{1}{\omega C}$ and $I_{\max} = \frac{V}{R}$.

(b) $V_C = IX_C = \frac{V}{R\omega_0 C} = \frac{V}{R} \sqrt{\frac{L}{C}}$.

(c) $V_L = IX_L = \frac{V}{R}\omega_0 L = \frac{V}{R} \sqrt{\frac{L}{C}}$.

(d) $U_C = \frac{1}{2}CV_C^2 = \frac{1}{2}C \frac{V^2}{R^2} \frac{L}{C} = \frac{1}{2}L \frac{V^2}{R^2}$.

(e) $U_L = \frac{1}{2}LI^2 = \frac{1}{2}L \frac{V^2}{R^2}$.

EVALUATE: At resonance $V_C = V_L$ and the maximum energy stored in the inductor equals the maximum energy stored in the capacitor.

31.69. IDENTIFY: $I = V/R$. $V_R = IR$, $V_C = IX_C$ and $V_L = IX_L$. $U_E = \frac{1}{2}CV_C^2$ and $U_L = \frac{1}{2}LI^2$.

SET UP: The amplitudes of each time dependent quantity correspond to the maximum values of those quantities.

EXECUTE: $\omega = \frac{\omega_0}{2}$.

(a) $I = \frac{V}{Z} = \frac{V}{\sqrt{R^2 + \left(\frac{\omega_0 L}{2} - 2/\omega_0 C\right)^2}} = \frac{V}{\sqrt{R^2 + \frac{9}{4} \frac{L}{C}}}$.

(b) $V_C = IX_C = \frac{2}{\omega_0 C} \frac{V}{\sqrt{R^2 + \frac{9}{4} \frac{L}{C}}} = \sqrt{\frac{L}{C}} \frac{2V}{\sqrt{R^2 + \frac{9}{4} \frac{L}{C}}}$.

(c) $V_L = IX_L = \frac{\omega_0 L}{2} \frac{V}{\sqrt{R^2 + \frac{9}{4} \frac{L}{C}}} = \sqrt{\frac{L}{C}} \frac{V/2}{\sqrt{R^2 + \frac{9}{4} \frac{L}{C}}}$.

(d) $U_C = \frac{1}{2}CV_C^2 = \frac{2LV^2}{R^2 + \frac{9}{4} \frac{L}{C}}$.

(e) $U_L = \frac{1}{2}LI^2 = \frac{1}{2} \frac{LV^2}{R^2 + \frac{9}{4} \frac{L}{C}}$.

EVALUATE: For $\omega < \omega_0$, $V_C > V_L$ and the maximum energy stored in the capacitor is greater than the maximum energy stored in the inductor.

31.70. IDENTIFY: $I = V/R$. $V_R = IR$, $V_C = IX_C$ and $V_L = IX_L$. $U_E = \frac{1}{2}CV_C^2$ and $U_L = \frac{1}{2}LI^2$.

SET UP: The amplitudes of each time dependent quantity correspond to the maximum values of those quantities.

EXECUTE: $\omega = 2\omega_0$.

(a) $I = \frac{V}{Z} = \frac{V}{\sqrt{R^2 + (2\omega_0 L - 1/2\omega_0 C)^2}} = \frac{V}{\sqrt{R^2 + \frac{9}{4} \frac{L}{C}}}$.

(b) $V_C = IX_C = \frac{1}{2\omega_0 C} \frac{V}{\sqrt{R^2 + \frac{9}{4} \frac{L}{C}}} = \sqrt{\frac{L}{C}} \frac{V/2}{\sqrt{R^2 + \frac{9}{4} \frac{L}{C}}}$.

(c) $V_L = IX_L = 2\omega_0 L \frac{V}{\sqrt{R^2 + \frac{9}{4} \frac{L}{C}}} = \sqrt{\frac{L}{C}} \frac{2V}{\sqrt{R^2 + \frac{9}{4} \frac{L}{C}}}$.

(d) $U_C = \frac{1}{2}CV_C^2 = \frac{LV^2}{8\sqrt{R^2 + \frac{9}{4} \frac{L}{C}}}$.

$$(e) U_L = \frac{1}{2}LI^2 = \frac{LV^2}{2\sqrt{R^2 + \frac{9}{4}\frac{L}{C}}}$$

EVALUATE: For $\omega > \omega_0$, $V_L > V_C$ and the maximum energy stored in the inductor is greater than the maximum energy stored in the capacitor.

- 31.71. IDENTIFY and SET UP:** Assume the angular frequency ω of the source and the resistance R of the resistor are known.

EXECUTE: Connect the source, capacitor, resistor, and inductor in series. Measure V_R and V_L . $\frac{V_L}{V_R} = \frac{I\omega L}{IR} = \frac{\omega L}{R}$ and L can be calculated.

EVALUATE: There are a number of other approaches. The frequency could be varied until $V_C = V_L$, and then this frequency is equal to $1/\sqrt{LC}$. If C is known, then L can be calculated.

- 31.72. IDENTIFY:** $P_{av} = V_{rms}I_{rms} \cos\phi$ and $I_{rms} = \frac{V_{rms}}{Z}$. Calculate Z . $R = Z \cos\phi$.

SET UP: $f = 50.0$ Hz and $\omega = 2\pi f$. The power factor is $\cos\phi$.

EXECUTE: (a) $P_{av} = \frac{V_{rms}^2}{Z} \cos\phi$. $Z = \frac{V_{rms}^2 \cos\phi}{P_{av}} = \frac{(120 \text{ V})^2 (0.560)}{(220 \text{ W})} = 36.7 \Omega$.

$R = Z \cos\phi = (36.7 \Omega)(0.560) = 20.6 \Omega$.

(b) $Z = \sqrt{R^2 + X_L^2}$. $X_L = \sqrt{Z^2 - R^2} = \sqrt{(36.7 \Omega)^2 - (20.6 \Omega)^2} = 30.4 \Omega$. But $\phi = 0$ is at resonance, so the inductive and capacitive reactances equal each other. Therefore we need to add $X_C = 30.4 \Omega$. $X_C = \frac{1}{\omega C}$ therefore gives

$$C = \frac{1}{\omega X_C} = \frac{1}{2\pi f X_C} = \frac{1}{2\pi(50.0 \text{ Hz})(30.4 \Omega)} = 1.05 \times 10^{-4} \text{ F}.$$

(c) At resonance, $P_{av} = \frac{V^2}{R} = \frac{(120 \text{ V})^2}{20.6 \Omega} = 699 \text{ W}$.

EVALUATE: $P_{av} = I_{rms}^2 R$ and I_{rms} is maximum at resonance, so the power drawn from the line is maximum at resonance.

- 31.73. IDENTIFY:** $p_R = i^2 R$. $p_L = iL \frac{di}{dt}$. $p_C = \frac{q}{C} i$.

SET UP: $i = I \cos \omega t$

EXECUTE: (a) $p_R = i^2 R = I^2 \cos^2(\omega t) R = V_R I \cos^2(\omega t) = \frac{1}{2} V_R I (1 + \cos(2\omega t))$.

$$P_{av}(R) = \frac{1}{T} \int_0^T p_R dt = \frac{V_R I}{2T} \int_0^T (1 + \cos(2\omega t)) dt = \frac{V_R I}{2T} [t]_0^T = \frac{1}{2} V_R I.$$

(b) $p_L = Li \frac{di}{dt} = -\omega LI^2 \cos(\omega t) \sin(\omega t) = -\frac{1}{2} V_L I \sin(2\omega t)$. But $\int_0^T \sin(2\omega t) dt = 0 \Rightarrow P_{av}(L) = 0$.

(c) $p_C = \frac{q}{C} i = v_C i = V_C I \sin(\omega t) \cos(\omega t) = \frac{1}{2} V_C I \sin(2\omega t)$. But $\int_0^T \sin(2\omega t) dt = 0 \Rightarrow P_{av}(C) = 0$.

(d) $p = p_R + p_L + p_C = V_R I \cos^2(\omega t) - \frac{1}{2} V_L I \sin(2\omega t) + \frac{1}{2} V_C I \sin(2\omega t)$ and

$$p = I \cos(\omega t) (V_R \cos(\omega t) - V_L \sin(\omega t) + V_C \sin(\omega t)).$$

But $\cos\phi = \frac{V_R}{V}$ and $\sin\phi = \frac{V_L - V_C}{V}$, so

$$p = VI \cos(\omega t) (\cos\phi \cos(\omega t) - \sin\phi \sin(\omega t)),$$

at any instant of time.

EVALUATE: At an instant of time the energy stored in the capacitor and inductor can be changing, but there is no net consumption of electrical energy in these components.

- 31.74. IDENTIFY:** $V_L = IX_L$. $\frac{dV_L}{d\omega} = 0$ at the ω where V_L is a maximum. $V_C = IX_C$. $\frac{dV_C}{d\omega} = 0$ at the ω where V_C is a maximum.

SET UP: Problem 31.51 shows that $I = \frac{V}{\sqrt{R^2 + (\omega L - 1/\omega C)^2}}$.

EXECUTE: (a) $V_R = \text{maximum}$ when $V_C = V_L \Rightarrow \omega = \omega_0 = \frac{1}{\sqrt{LC}}$.

$$\begin{aligned}
 \text{(b) } V_L &= \text{maximum when } \frac{dV_L}{d\omega} = 0. \text{ Therefore: } \frac{dV_L}{d\omega} = 0 = \frac{d}{d\omega} \left(\frac{V\omega L}{\sqrt{R^2 + (\omega L - 1/\omega C)^2}} \right). \\
 0 &= \frac{VL}{\sqrt{R^2 + (\omega L - 1/\omega C)^2}} - \frac{V\omega^2 L(L - 1/\omega^2 C)(L + 1/\omega^2 C)}{(R^2 + (\omega L - 1/\omega C)^2)^{3/2}}. \quad R^2 + (\omega L - 1/\omega C)^2 = \omega^2(L^2 - 1/\omega^4 C^2). \\
 R^2 + \frac{1}{\omega^2 C^2} - \frac{2L}{C} &= -\frac{1}{\omega^2 C^2} \cdot \frac{1}{\omega^2} = LC - \frac{R^2 C^2}{2} \text{ and } \omega = \frac{1}{\sqrt{LC - R^2 C^2/2}}.
 \end{aligned}$$

$$\begin{aligned}
 \text{(c) } V_C &= \text{maximum when } \frac{dV_C}{d\omega} = 0. \text{ Therefore: } \frac{dV_C}{d\omega} = 0 = \frac{d}{d\omega} \left(\frac{V}{\omega C \sqrt{R^2 + (\omega L - 1/\omega C)^2}} \right). \\
 0 &= -\frac{V}{\omega^2 C \sqrt{R^2 + (\omega L - 1/\omega C)^2}} - \frac{V(L - 1/\omega^2 C)(L + 1/\omega^2 C)}{C(R^2 + (\omega L - 1/\omega C)^2)^{3/2}}. \quad R^2 + (\omega L - 1/\omega C)^2 = -\omega^2(L^2 - 1/\omega^4 C^2). \\
 R^2 + \omega^2 L^2 - \frac{2L}{C} &= -\omega^2 L^2 \text{ and } \omega = \sqrt{\frac{1}{LC} - \frac{R^2}{2L^2}}. \\
 R^2 + \omega^2 L^2 - \frac{2L}{C} &= -\omega^2 L^2.
 \end{aligned}$$

EVALUATE: V_L is maximum at a frequency greater than the resonance frequency and X_C is a maximum at a frequency less than the resonance frequency. These frequencies depend on R , as well as on L and on C .

31.75. IDENTIFY: Follow the steps specified in the problem.

SET UP: In part (a) use Eq.(31.23) to calculate Z and then $I = V/Z$. ϕ is given by Eq.(31.24). In part (b) let $Z = R + iX$.

EXECUTE: (a) From the current phasors we know that $Z = \sqrt{R^2 + (\omega L - 1/\omega C)^2}$.

$$Z = \sqrt{(400 \Omega)^2 + \left((1000 \text{ rad/s})(0.50 \text{ H}) - \frac{1}{(1000 \text{ rad/s})(1.25 \times 10^{-6} \text{ F})} \right)^2} = 500 \Omega.$$

$$I = \frac{V}{Z} = \frac{200 \text{ V}}{500 \Omega} = 0.400 \text{ A}.$$

$$\text{(b) } \phi = \arctan\left(\frac{\omega L - 1/(\omega C)}{R}\right). \quad \phi = \arctan\left(\frac{(1000 \text{ rad/s})(0.500 \text{ H}) - 1/(1000 \text{ rad/s})(1.25 \times 10^{-6} \text{ F})}{400 \Omega}\right) = +36.9^\circ$$

$$\text{(c) } Z_{\text{cpx}} = R + i\left(\omega L - \frac{1}{\omega C}\right). \quad Z_{\text{cpx}} = 400 \Omega - i\left((1000 \text{ rad/s})(0.50 \text{ H}) - \frac{1}{(1000 \text{ rad/s})(1.25 \times 10^{-6} \text{ F})}\right) = 400 \Omega - 300 \Omega i.$$

$$Z = \sqrt{(400 \Omega)^2 + (-300 \Omega)^2} = 500 \Omega.$$

$$\text{(d) } I_{\text{cpx}} = \frac{V}{Z_{\text{cpx}}} = \frac{200 \text{ V}}{(400 - 300i) \Omega} = \left(\frac{8 + 6i}{25}\right) \text{ A} = (0.320 \text{ A}) + (0.240 \text{ A})i. \quad I = \sqrt{\left(\frac{8 + 6i}{25}\right) \left(\frac{8 - 6i}{25}\right)} = 0.400 \text{ A}.$$

$$\text{(e) } \tan \phi = \frac{\text{Im}(I_{\text{cpx}})}{\text{Re}(I_{\text{cpx}})} = \frac{6/25}{8/25} = 0.75 \Rightarrow \phi = +36.9^\circ.$$

$$\text{(f) } V_{R_{\text{cpx}}} = I_{\text{cpx}} R = \left(\frac{8 + 6i}{25}\right) (400 \Omega) = (128 + 96i) \text{ V}.$$

$$V_{L_{\text{cpx}}} = i I_{\text{cpx}} \omega L = i \left(\frac{8 + 6i}{25}\right) (1000 \text{ rad/s})(0.500 \text{ H}) = (-120 + 160i) \text{ V}.$$

$$V_{C_{\text{cpx}}} = i \frac{I_{\text{cpx}}}{\omega C} = i \left(\frac{8 + 6i}{25}\right) \frac{1}{(1000 \text{ rad/s})(1.25 \times 10^{-6} \text{ F})} = (+192 - 256i) \text{ V}.$$

$$\text{(g) } V_{\text{cpx}} = V_{R_{\text{cpx}}} + V_{L_{\text{cpx}}} + V_{C_{\text{cpx}}} = (128 + 96i) \text{ V} + (-120 + 160i) \text{ V} + (192 - 256i) \text{ V} = 200 \text{ V}.$$

EVALUATE: Both approaches yield the same value for I and for ϕ .

